



UNIVERSITY OF CAMBRIDGE INTERNATIONAL EXAMINATIONS  
General Certificate of Education Advanced Level

CANDIDATE  
NAME

CENTRE  
NUMBER

--	--	--	--	--

CANDIDATE  
NUMBER

--	--	--	--



**COMPUTING**

**9691/31**

Paper 3

**May/June 2012**

**2 hours**

Candidates answer on the Question Paper.

No additional materials are required.

No calculators allowed.

**READ THESE INSTRUCTIONS FIRST**

Write your Centre number, candidate number and name on all the work you hand in.

Write in dark blue or black pen.

You may use a soft pencil for any diagrams, graphs or rough working.

Do not use staples, paper clips, highlighters, glue or correction fluid.

**DO NOT WRITE IN ANY BARCODES.**

Answer **all** questions.

No marks will be awarded for using brand names for software packages or hardware.

At the end of the examination, fasten all your work securely together.

The number of marks is given in brackets [ ] at the end of each question or part question.

This document consists of **16** printed pages.



1 A database is designed to store data about students at a college and the subjects that they study.

- All students are based in a tutor group
- A tutor supervises all the students in their tutor group
- Each subject has one subject teacher only
- Students study a number of subjects

The following table `StudentSubjects` was a first attempt at the database design.

Table: `StudentSubjects`

StudentName	TutorGroup	Tutor	Subject	Level	SubjectTeacher
Tom	6	SAN	Physics	A	SAN
			Chemistry	A	MEB
			Gen. Studies	AS	DIL
Joe	7	MEB	Geography	AS	ROG
			French	AS	HEN
Samir	6	SAN	Computing	A	VAR
			Chemistry	A	MEB
			Maths	A	COR
			Gen. Studies	A	DIL

(a) (i) Explain why the table is not in First Normal Form (1NF).

.....  
 ..... [1]

(ii) Explain your answer by referring to the above data.

.....  
 ..... [1]

(b) The design is changed to the following:

`Student (StudentName, TutorGroup, Tutor)`  
`StudentSubjectChoices (StudentName, Subject, Level, SubjectTeacher)`

Using the data given in the original table, show how this data is now stored in the revised table designs.

For  
Examiner's  
Use

Table: Student

StudentName	TutorGroup	Tutor

Table: StudentSubjectChoices

StudentName	Subject	Level	SubjectTeacher

[3]

(c) (i) Explain what is meant by a primary key.

.....

.....

.....

..... [2]

(ii) A student is not allowed to choose the same subject at A Level and AS.

What is the primary key of table StudentSubjectChoices?

..... [1]

(iii) There is a relationship between tables `Student` and `StudentSubjectChoices`.  
Explain how the relationship is **established** using a primary key and foreign key.

.....  
.....  
.....  
..... [2]

(d) The design of table `StudentSubjectChoices` is:

`StudentSubjectChoices (StudentName, Subject, Level, SubjectTeacher)`

Explain why this table is not in Second Normal Form (2NF).

.....  
.....  
.....  
..... [2]

(e) The design of table `Student` is:

`Student (StudentName, TutorGroup, Tutor)`

Explain why this table is not in Third Normal Form (3NF).

.....  
.....  
.....  
..... [2]

2 A binary pattern can be used to represent different data used in a computer system.

(a) Consider the binary pattern: **0101 0011**

The pattern represents an integer.

What number is this in denary?

..... [1]

(b) Consider the binary pattern: **0001 0101 0011**

The pattern represents a Binary Coded Decimal (BCD) number.

What number is this in denary?

..... [1]

(c) Consider the binary pattern: **1001 0010**

This represents a two's complement integer.

What number is this in denary?

..... [1]

(d) Floating point is to be used to represent real numbers with:

- 8 bits for the mantissa, followed by
- 4 bits for the exponent
- two's complement used for both the mantissa and the exponent

(i) Consider the binary pattern:



What number is this in denary? Show your working.

.....

.....

.....

.....

.....

..... [3]

(ii) The representation shown in part (d)(i) is normalised.


Explain why floating point numbers are normalised.

.....


..... [1]

(iii) Show the binary pattern for the smallest positive number which can be stored using a normalised 12-bit floating point representation.

Mantissa:



Exponent:



Work out its denary value.

Denary: ..... [3]

- (e) The developer of a new programming language decides that all real numbers will be stored using 20-bit normalised floating point representation. She cannot decide how many bits to use for the mantissa and how many for the exponent.

*For  
Examiner's  
Use*

Explain the trade-off between using either a large number of bits for the mantissa, or a large number of bits for the exponent.

.....

.....

.....

..... [2]

- 3 (a) Customer names are stored in the array *Customer*.  
An algorithm is to be designed to perform a serial search of the array for a requested customer name.  
The algorithm will use the variables shown in the table.

Study the table and the algorithm and fill in the gaps.

Identifier	Data Type	Description
Customer	ARRAY[2000] OF STRING	The customer names
Index	INTEGER	Index position in the customer array
IsFound	.....	.....
SearchName	STRING	The requested customer name

```
//Serial search algorithm
INPUT .....
IsFound ← FALSE
Index ← 1

REPEAT
  IF Customer [ ..... ] = SearchName
    THEN
      IsFound ← TRUE
      OUTPUT "FOUND - at position " Index " in the array"
    ELSE
      Index ← .....
    ENDIF
UNTIL (IsFound = TRUE) OR .....

IF .....
  THEN
    OUTPUT "Customer name was NOT FOUND"
ENDIF
```

[7]

- (b) Comment on the efficiency of the serial search algorithm in part (a) for retrieving a data item from an array with 2000 items.

.....  
 .....  
 .....  
 .....

[2]



(c) A binary search may be an alternative algorithm to a serial search.

For  
Examiner's  
Use

(i) Describe how this algorithm works. (Do **not** attempt to write the pseudocode.)

.....  
.....  
.....  
.....  
.....  
.....  
.....  
.....

[4]

(ii) A binary search is made to locate Cherry.

1	Apple
2	Banana
3	Cherry
4	Kiwi
5	Lemon
6	Mango
7	Plum

List, in order, the comparisons which are made.

.....  
.....  
.....

[3]

4 Expressions can be written in either infix or reverse Polish notation.

(a) Evaluate this reverse Polish expression:

4 6 \* 3 -

..... [1]

(b) Write the following infix expressions in reverse Polish.

(i) (a-5) / (b+c)

..... [1]

(ii) 2 \* 3 + 6 / 2

..... [2]

(c) Describe **one** benefit of storing an expression in reverse Polish.

..... [1]

(d) An expression in reverse Polish can be evaluated on a computer system using a stack.

(i) Describe the operation of a stack.

..... [1]

(ii) A stack is to be implemented as an array with an integer variable to point to the 'top of stack' index position.

State whether this is a static data structure or a dynamic data structure and explain your choice.

..... [2]

- (iii) The reverse Polish expression  $3\ 7\ * \ 6\ + \ 9\ /$  is to be evaluated using a stack. The first available location on the stack is 1.

*For  
Examiner's  
Use*

Show how the contents of the stack change as this expression is evaluated.

5							
4							
3							
2							
1							

[4]

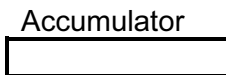
5 The table shows the assembly language instructions for a processor which has one general purpose register – the Accumulator.

For  
Examiner's  
Use

Instruction		Explanation
Op Code	Operand	
LDD	<address>	Load using direct addressing
STO	<address>	Store the contents of the Accumulator at the given address
LDI	<address>	Load using indirect addressing
LDX	<address>	Load using indexed addressing
INC		Add 1 to the contents of the Accumulator
END		End the program and return to the operating system

(a) Write on the diagram to explain the instruction shown.  
Show the contents of the Accumulator after the execution of the instruction.

LDD 105

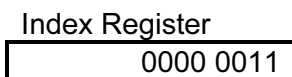
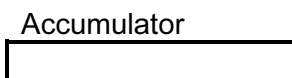


Main memory	
100	0100 0000
101	0110 1000
102	1111 1110
103	1111 1010
104	0101 1101
105	0001 0001
106	1010 1000
107	1100 0001
200	1001 1111

[2]

(b) Write on the diagram to explain the instruction shown.  
Show the contents of the registers after the execution of the instruction.

LDX 101



Main memory	
100	0100 0000
101	0110 1000
102	1111 1110
103	1111 1010
104	0101 1101
105	0001 0001
106	1010 1000
107	1100 0001
200	1001 1111

[4]

(c) Trace this assembly language program using the trace table below.

500	LDD	507
501	INC	
502	STO	509
503	LDD	508
504	INC	
505	STO	510
506	END	
507	22	
508	170	
509	0	
510	0	

For  
Examiner's  
Use

Accumulator	Memory Address			
	507	508	509	510
	22	170	0	0

[5]

(d) Explain the relationship between assembly language instructions and machine code instructions.

.....

.....

..... [1]

6 In a multiprogramming environment the operating system includes a scheduler.

(a) Explain the purpose of the scheduler.

.....  
.....  
.....  
..... [2]

(b) A process will at any time be in one of three states.

(i) Name and describe each possible state.

1 .....  
.....  
.....  
2 .....  
.....  
.....  
3 .....  
.....  
..... [6]

(ii) How will the operating system keep details about the state of all processes?

.....  
..... [1]

(c) Any process can be described as either 'processor bound' or 'input/output bound'.

For  
Examiner's  
Use

(i) Explain what is meant by these terms and give a typical application of each.

Processor bound .....

.....

Application which is processor bound .....

.....

Input/Output bound .....

.....

Application which is I/O bound .....

..... [4]

(ii) A particular scheduler allocates a priority to each process for the use of the processor.

State which type of process – processor bound or I/O bound – would be given higher priority for the use of the processor. Explain why.

.....

.....

..... [2]

7 (a) Define what is meant by the term computer simulation.

.....

.....

.....

..... [2]

(b) Give **two** reasons why a computer system is particularly suited to carrying out a simulation.

1 .....

.....

2 .....

..... [2]

(c) A supermarket is about to open a new branch and is to use a computer simulation to estimate the number of checkouts which will be required.

Identify **three** variables which need to be controlled by the software simulation of the checkout operation.

1 .....

2 .....

3 ..... [3]

(d) The values input to the simulation will affect the outputs produced.

Give **one** example for this checkout scenario of a change to an input which will directly affect the output.

Input change .....

.....

Effect on the output .....

..... [2]

Permission to reproduce items where third-party owned material protected by copyright is included has been sought and cleared where possible. Every reasonable effort has been made by the publisher (UCLES) to trace copyright holders, but if any items requiring clearance have unwittingly been included, the publisher will be pleased to make amends at the earliest possible opportunity.

University of Cambridge International Examinations is part of the Cambridge Assessment Group. Cambridge Assessment is the brand name of University of Cambridge Local Examinations Syndicate (UCLES), which is itself a department of the University of Cambridge.