



Cambridge IGCSE™

CANDIDATE NAME



CENTRE NUMBER

--	--	--	--	--

CANDIDATE NUMBER

--	--	--	--



COMBINED SCIENCE

0653/43

Paper 4 Theory (Extended)

October/November 2024

1 hour 15 minutes

You must answer on the question paper.

No additional materials are needed.

INSTRUCTIONS

- Answer **all** questions.
- Use a black or dark blue pen. You may use an HB pencil for any diagrams or graphs.
- Write your name, centre number and candidate number in the boxes at the top of the page.
- Write your answer to each question in the space provided.
- Do **not** use an erasable pen or correction fluid.
- Do **not** write on any bar codes.
- You may use a calculator.
- You should show all your working and use appropriate units.

INFORMATION

- The total mark for this paper is 80.
- The number of marks for each question or part question is shown in brackets [].
- The Periodic Table is printed in the question paper.

This document has **20** pages. Any blank pages are indicated.





1 Fig. 1.1 shows a food web.

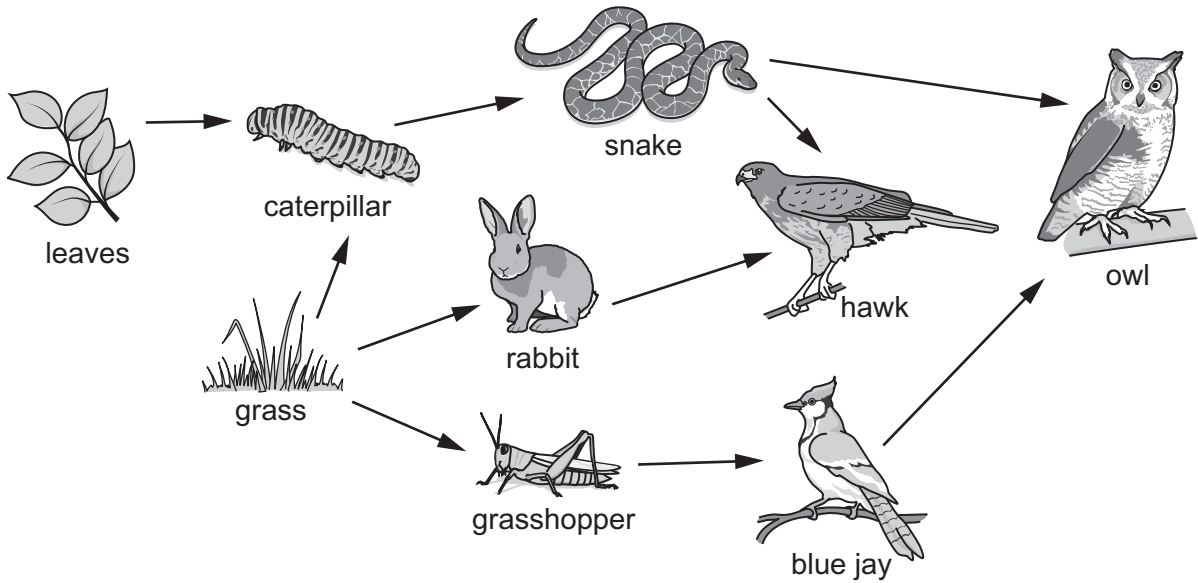


Fig. 1.1

(a) (i) Identify **one** herbivore shown in Fig. 1.1.

..... [1]

(ii) Identify **all** the animals that eat the snake.

..... [1]

(iii) Identify **all** the animals that occupy trophic level 3.

..... [1]

(b) The food web in Fig. 1.1 contains food chains with fewer than five trophic levels.

Explain why food chains usually have fewer than five trophic levels.

.....
.....
.....
.....
..... [3]

[Total: 6]

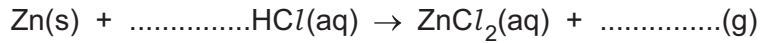
DO NOT WRITE IN THIS MARGIN





2 (a) Excess solid zinc is added to dilute hydrochloric acid in a conical flask.

(i) Complete the equation for the reaction.



[2]

(ii) Describe what is observed during this reaction.

.....
.....
..... [2]

(iii) The mixture in the flask at the end of the reaction contains unreacted solid zinc and aqueous zinc chloride.

State how unreacted solid zinc is removed from this mixture.

.....
..... [1]

(iv) Describe how crystals of zinc chloride are obtained from aqueous zinc chloride.

.....
.....
..... [2]

(b) The formula for sodium chloride is NaCl.

The formula for zinc chloride is ZnCl₂.

Explain why sodium chloride and zinc chloride contain different numbers of chloride ions.

Use ideas about the charges on ions in your answer.

.....
.....
..... [2]

[Total: 9]



DO NOT WRITE IN THIS MARGIN



3 (a) Complete the sentences about sound. Use **one** word or a number in each gap.

Sound is produced by sources.

The healthy human ear can hear frequencies of sound between Hz and 20 000 Hz.

Sound travels faster in liquids than in

[3]

(b) State why a wave is refracted as it moves from one medium to another.

.....
 [1]

(c) Table 3.1 shows some of the properties of solids, liquids and gases and how the kinetic model of matter explains these properties.

In Table 3.1, circle **one** statement in each column that relates to **gases**.

One column has been completed for you.

Table 3.1

volume and shape	fluidity	molecular motion	molecular separation	intermolecular forces
fixed volume and fixed shape	(can flow)	molecules move only by vibrating about fixed positions	molecules are close together	no forces between molecules
fixed volume and no fixed shape	cannot flow	molecules move around while still touching each other	molecules are far apart	moderate forces between molecules
no fixed volume and no fixed shape		molecules move quickly in all directions		strong forces between molecules

[2]





(d) A radio signal of frequency 1.2×10^7 Hz is sent from a satellite in space to the Moon.

Calculate the wavelength of the radio signal.

The speed of electromagnetic waves in a vacuum is 3.0×10^8 m/s.

wavelength = m [2]

[Total: 8]

DO NOT WRITE IN THIS MARGIN





4 (a) The photosynthesis reaction in plants is controlled by enzymes.

(i) The rate of photosynthesis in a submerged aquatic plant is measured by counting the number of gas bubbles released by the plant in 5 minutes.

Table 4.1 shows the effect of temperature on the rate of photosynthesis in an aquatic plant.

Table 4.1

temperature of water / °C	number of gas bubbles released in 5 minutes
10	30
20	72
30	96
40	42
50	28
60	2

Explain the result for 60 °C in Table 4.1.

Use ideas about enzymes in your answer.

.....

.....

.....

.....

.....

.....

..... [3]

(ii) Describe the importance of stomata in the process of photosynthesis.

.....

.....

..... [2]

DO NOT WRITE IN THIS MARGIN

DO NOT WRITE IN THIS MARGIN

DO NOT WRITE IN THIS MARGIN

DO NOT WRITE IN THIS MARGIN

DO NOT WRITE IN THIS MARGIN





(iii) Carbohydrates produced in photosynthesis are stored as starch in plants.

State the solution used to test for the presence of starch and the observation for a positive result.

solution

observation

[2]

(b) Starch is part of a balanced diet for humans.

Complete the sentences about starch digestion in the human alimentary canal.

Starch is digested by an enzyme called

The enzyme breaks down starch molecules into smaller carbohydrate molecules called

The enzyme is secreted into the mouth from the glands and into the small intestine from the

[4]

[Total: 11]

DO NOT WRITE IN THIS MARGIN





5 Dilute sulfuric acid is electrolysed using inert electrodes as shown in Fig. 5.1.

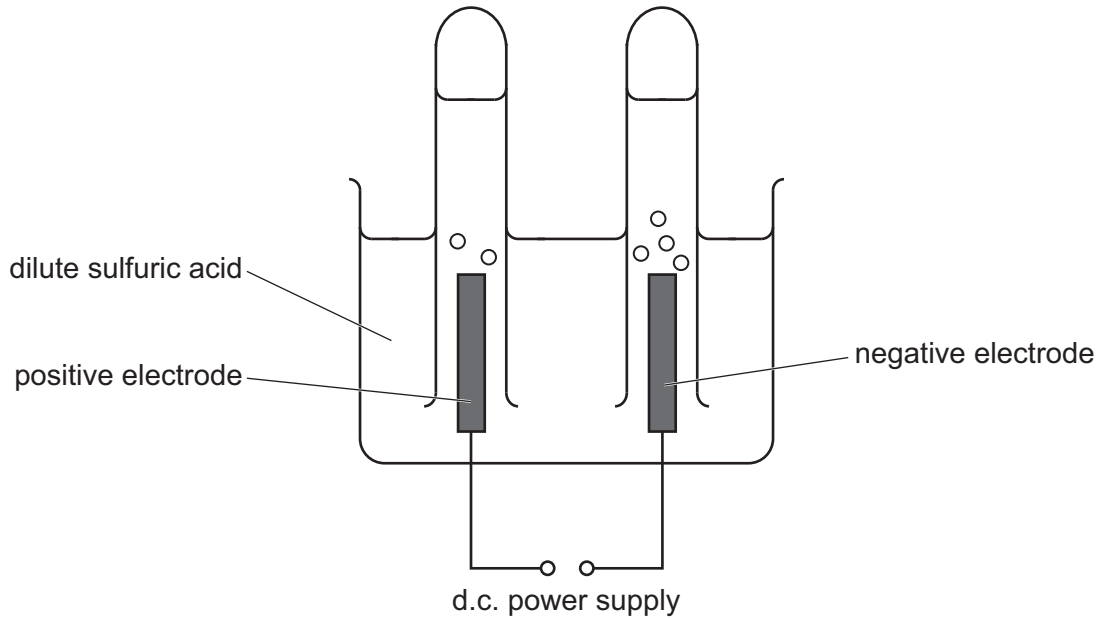


Fig. 5.1

(a) Use **one** word in each gap to complete the definition of electrolysis.

Electrolysis is the breakdown of an ionic when molten or in aqueous solution by the passage of

[2]

(b) Hydrogen gas forms at the negative electrode.

Complete the ionic equation for the reaction.



[2]

(c) Dilute sulfuric acid contains water.

Hydroxide ions from the water react at the positive electrode to form oxygen gas.

Describe what happens to the hydroxide ions in this reaction.

.....

.....

..... [2]

DO NOT WRITE IN THIS MARGIN

DO NOT WRITE IN THIS MARGIN

DO NOT WRITE IN THIS MARGIN

DO NOT WRITE IN THIS MARGIN

DO NOT WRITE IN THIS MARGIN





- (d) Universal indicator is added to the dilute sulfuric acid at the beginning of the electrolysis. The universal indicator turns red.

Explain why the universal indicator does **not** change colour when the dilute sulfuric acid is electrolysed.

.....
..... [1]

[Total: 7]

DO NOT WRITE IN THIS MARGIN





6 Fig. 6.1 shows an ox pulling a plough along horizontal ground.

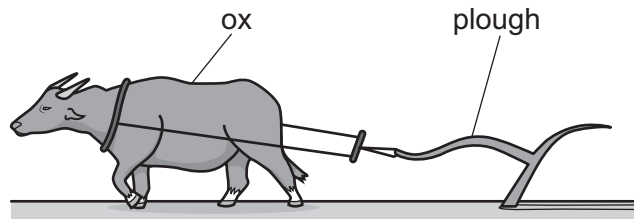


Fig. 6.1

(a) Fig. 6.2 shows a speed–time graph for the motion of the ox and plough on one journey.

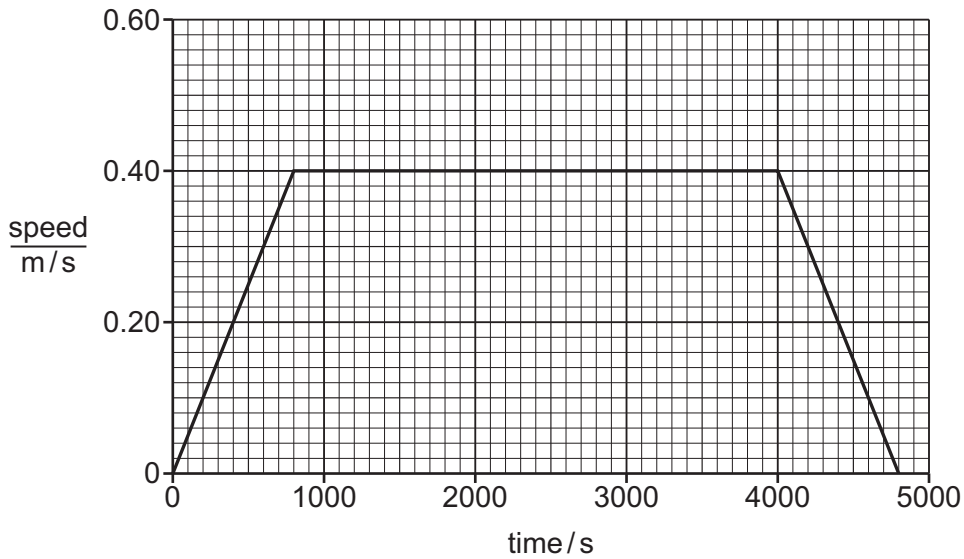


Fig. 6.2

(i) Use Fig. 6.2 to state the maximum speed of the ox and plough on this journey.

maximum speed = m/s [1]

(ii) Use Fig. 6.2 to calculate the total distance, **in kilometres**, travelled by the ox and plough.

distance = km [3]

DO NOT WRITE IN THIS MARGIN

DO NOT WRITE IN THIS MARGIN

DO NOT WRITE IN THIS MARGIN

DO NOT WRITE IN THIS MARGIN

DO NOT WRITE IN THIS MARGIN





- (b) On a different journey, the ox pulls the plough along horizontal ground with a constant force of 1100 N for 330 s.

The work done on the plough is 462 000 J.

The total energy output of the ox is 792 000 J.

- (i) Calculate the distance, **in metres**, moved by the plough.

distance = m [2]

- (ii) Suggest why the total energy output of the ox is greater than the work done on the plough.

.....
 [2]

- (iii) Calculate the total power output of the ox.

Give the unit of your answer.

power = unit [3]

[Total: 11]

DO NOT WRITE IN THIS MARGIN





7 (a) Fig. 7.1 shows a diagram of the double circulatory system in humans.

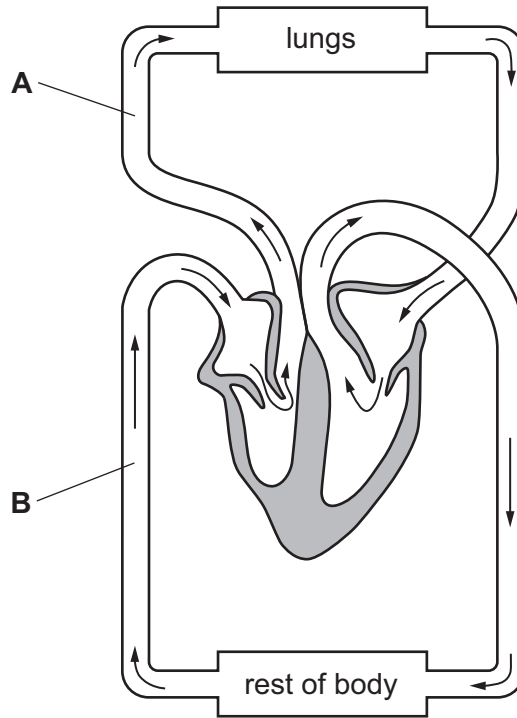


Fig. 7.1

The arrows show the direction of blood flow.

(i) State the names of the blood vessels labelled **A** and **B** on Fig. 7.1.

A

B

[2]

(ii) Use a label line with the letter **X** to label the **left** atrium in Fig. 7.1.

[1]

(iii) Describe how the heart pumps blood to the body.

.....
.....
..... [2]

(b) Coronary heart disease (CHD) has many risk factors.

One risk factor is gender.

(i) State **two** other risk factors for coronary heart disease.

1

2

[2]

DO NOT WRITE IN THIS MARGIN

DO NOT WRITE IN THIS MARGIN

DO NOT WRITE IN THIS MARGIN

DO NOT WRITE IN THIS MARGIN

DO NOT WRITE IN THIS MARGIN





- (ii) A medical study records the number of male and female people with coronary heart disease in one country over a period of 32 years.

Fig. 7.2 shows a graph of the results.

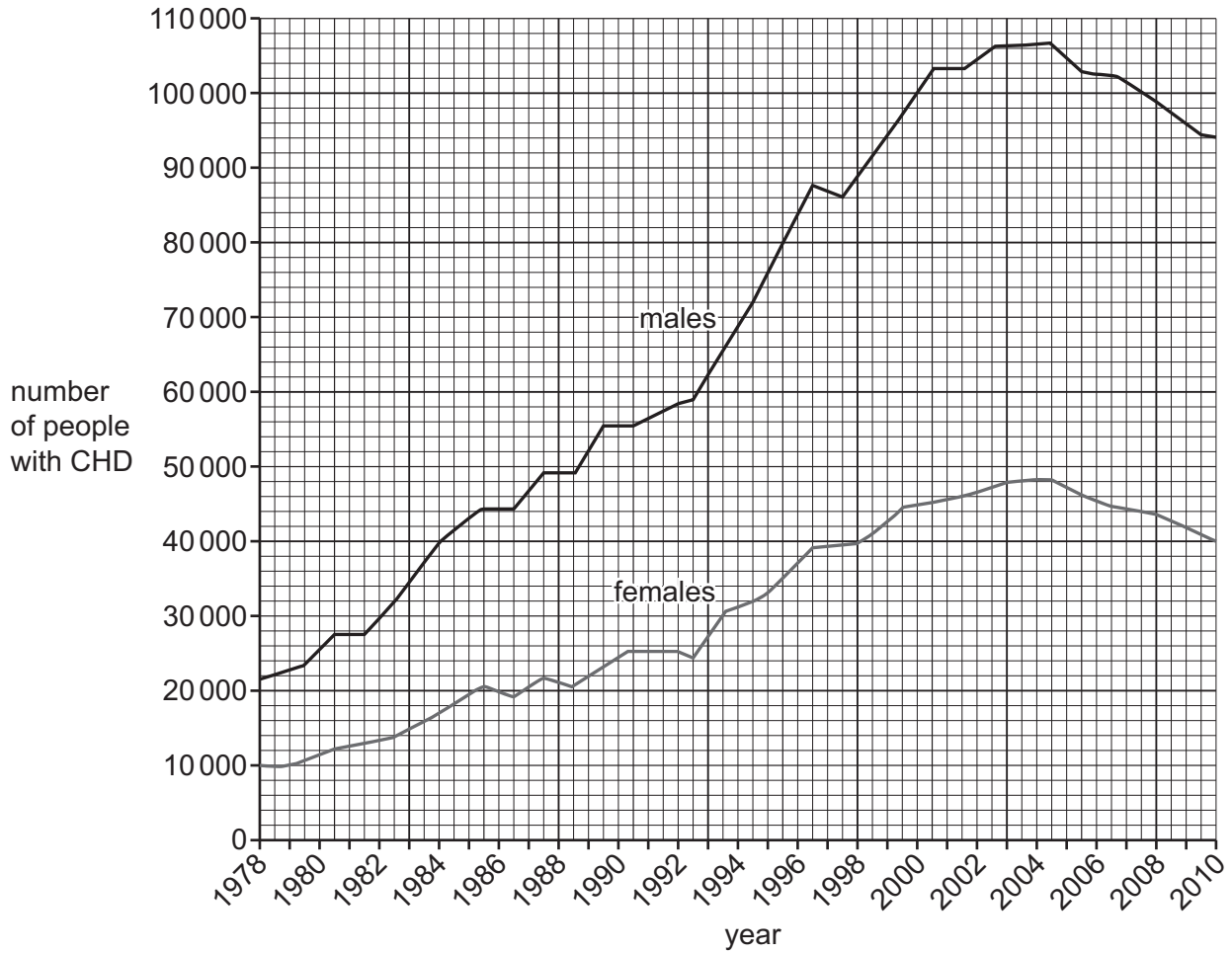


Fig. 7.2

Compare the trends for males and females shown in Fig. 7.2.

Use data from Fig. 7.2 in your answer.

.....

.....

.....

.....

..... [3]

[Total: 10]



DO NOT WRITE IN THIS MARGIN



- 8 (a) The formula for methanol is CH_3OH .

Complete the dot-and-cross diagram in Fig. 8.1 to show the bonding in methanol.

Show outer-shell electrons only.

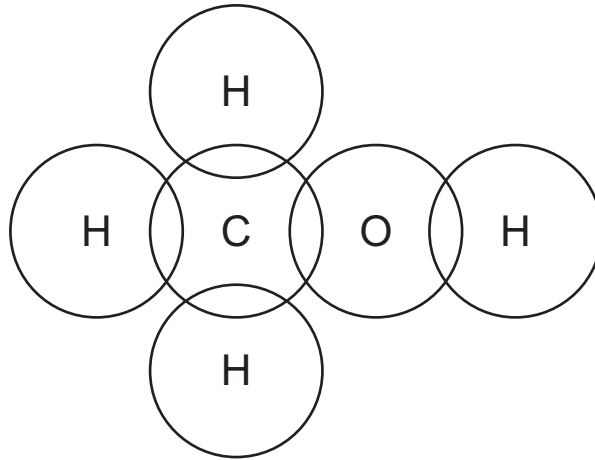


Fig. 8.1

[3]

- (b) Ethene, C_2H_4 , is an alkene.

Ethane, C_2H_6 , is an alkane.

- (i) State **one** difference in the bonding of ethene and of ethane.

.....
 [1]

- (ii) The complete combustion reactions of both ethene and ethane produce carbon dioxide and water.

Identify whether the statements are true or false.

Tick (✓) **one** box for each statement.

	true	false
One molecule of ethene produces the same number of molecules of carbon dioxide as one molecule of ethane.	<input type="checkbox"/>	<input type="checkbox"/>
One molecule of ethene produces the same number of molecules of water as one molecule of ethane.	<input type="checkbox"/>	<input type="checkbox"/>
The combustion reactions of ethene and ethane are both endothermic.	<input type="checkbox"/>	<input type="checkbox"/>

[2]





(c) The general formulae for alkenes and alkanes are shown in Table 8.1.

Table 8.1

alkenes	alkanes
C_nH_{2n}	C_nH_{2n+2}

Write the formula for:

an alkene with 10 hydrogen atoms

an alkane with 10 hydrogen atoms.

[2]

(d) Aqueous bromine is added to a sample of an alkene and to a separate sample of an alkane.

State the colour of each sample after the aqueous bromine is added.

alkene

alkane

[2]


[Total: 10]



DO NOT WRITE IN THIS MARGIN



9 (a) State the name of the component with the electrical symbol shown.



..... [1]

(b) Fig. 9.1 shows a circuit diagram for the two headlamps and two rear lamps of a car.

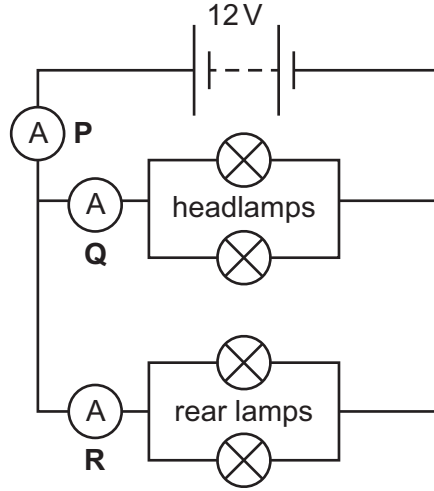


Fig. 9.1

Both headlamps are identical.

Both rear lamps are identical but different from the headlamps.

Ammeter P reads 11.0A.

Ammeter R reads 1.0A.

(i) Determine the reading on ammeter Q.

reading = A [1]





(ii) Use your answer to (b)(i) to determine the resistance of **one** headlamp.

resistance = Ω [3]

(c) A motorcycle has **one** headlamp and **one** rear lamp.

Each lamp is made from a length of filament wire.

The wires in each lamp are made of the same metal.

The wire in the rear lamp:

- is three times the length of the wire in the headlamp
- has half the cross-sectional area of the wire in the headlamp.

The resistance of the headlamp of the motorcycle is 3.0Ω .

Determine the resistance of the rear lamp of the motorcycle.

resistance = Ω [3]

[Total: 8]

DO NOT WRITE IN THIS MARGIN





DO NOT WRITE IN THIS MARGIN

DO NOT WRITE IN THIS MARGIN

DO NOT WRITE IN THIS MARGIN

DO NOT WRITE IN THIS MARGIN

DO NOT WRITE IN THIS MARGIN





BLANK PAGE

DO NOT WRITE IN THIS MARGIN

Permission to reproduce items where third-party owned material protected by copyright is included has been sought and cleared where possible. Every reasonable effort has been made by the publisher (UCLES) to trace copyright holders, but if any items requiring clearance have unwittingly been included, the publisher will be pleased to make amends at the earliest possible opportunity.

To avoid the issue of disclosure of answer-related information to candidates, all copyright acknowledgements are reproduced online in the Cambridge Assessment International Education Copyright Acknowledgements Booklet. This is produced for each series of examinations and is freely available to download at www.cambridgeinternational.org after the live examination series.

Cambridge Assessment International Education is part of Cambridge Assessment. Cambridge Assessment is the brand name of the University of Cambridge Local Examinations Syndicate (UCLES), which is a department of the University of Cambridge.



