


CANDIDATE  
NAME

CENTRE  
NUMBER

--	--	--	--	--

CANDIDATE  
NUMBER

--	--	--	--



**CAMBRIDGE INTERNATIONAL MATHEMATICS**

**0607/22**

Paper 2 (Extended)

**October/November 2015**

**45 minutes**

Candidates answer on the Question Paper.

Additional Materials: Geometrical Instruments

**READ THESE INSTRUCTIONS FIRST**

Write your Centre number, candidate number and name on all the work you hand in.

Write in dark blue or black pen.

Do not use staples, paper clips, glue or correction fluid.

You may use an HB pencil for any diagrams or graphs.

**DO NOT WRITE IN ANY BARCODES.**

Answer **all** the questions.

**CALCULATORS MUST NOT BE USED IN THIS PAPER.**

All answers should be given in their simplest form.

You must show all the relevant working to gain full marks and you will be given marks for correct methods even if your answer is incorrect.

The number of marks is given in brackets [ ] at the end of each question or part question.

The total number of marks for this paper is 40.

This document consists of **8** printed pages.

## Formula List

For the equation  $ax^2 + bx + c = 0$   $x = \frac{-b \pm \sqrt{b^2 - 4ac}}{2a}$

Curved surface area,  $A$ , of cylinder of radius  $r$ , height  $h$ .  $A = 2\pi rh$

Curved surface area,  $A$ , of cone of radius  $r$ , sloping edge  $l$ .  $A = \pi rl$

Curved surface area,  $A$ , of sphere of radius  $r$ .  $A = 4\pi r^2$

Volume,  $V$ , of pyramid, base area  $A$ , height  $h$ .  $V = \frac{1}{3}Ah$

Volume,  $V$ , of cylinder of radius  $r$ , height  $h$ .  $V = \pi r^2 h$

Volume,  $V$ , of cone of radius  $r$ , height  $h$ .  $V = \frac{1}{3}\pi r^2 h$

Volume,  $V$ , of sphere of radius  $r$ .  $V = \frac{4}{3}\pi r^3$



$$\frac{a}{\sin A} = \frac{b}{\sin B} = \frac{c}{\sin C}$$

$$a^2 = b^2 + c^2 - 2bc \cos A$$

$$\text{Area} = \frac{1}{2}bc \sin A$$

Answer **all** the questions.

1 (a) Work out  $16 - 8 \div 2 + 2 \times 4$ .

*Answer(a)* ..... [1]

(b) Work out  $(8 \times 10^{-4}) \times (2 \times 10^{-3})$ , giving your answer in standard form.

*Answer(b)* ..... [2]

---

2 Solve.

(a)  $2x - 3(1 - 4x) = 2(11 - 3x)$

*Answer(a) x =* ..... [3]

(b)  $|4x - 3| = 11$

*Answer(b) x =* ..... [2]

---

- 3  $x$  varies as the square of  $y$ .  
When  $y = 4$ ,  $x = 32$ .

Find  $x$  when  $y = 5$ .

*Answer*  $x =$  ..... [3]

---

- 4 Two fair dice, each numbered 1, 2, 3, 4, 5, 6, are rolled and the **total** score is recorded.

Find the probability that the total score is

(a) 12,

*Answer(a)* ..... [2]

(b) 13,

*Answer(b)* ..... [1]

(c) 7.

*Answer(c)* ..... [2]

---

$$5 \quad \mathbf{a} = \begin{pmatrix} 5 \\ -12 \end{pmatrix} \quad \mathbf{b} = \begin{pmatrix} 2 \\ -3 \end{pmatrix}$$

(a) Find  $\mathbf{a} - 3\mathbf{b}$ .

*Answer(a)*  $\begin{pmatrix} \phantom{0} \\ \phantom{0} \end{pmatrix}$  [2]

(b) Work out  $|\mathbf{a}|$ .

*Answer(b)* ..... [2]

---

6 Factorise.

(a)  $8ax - by + 2ay - 4bx$

*Answer(a)* ..... [2]

(b)  $3x^2 - 5x - 12$

*Answer(b)* ..... [2]

---

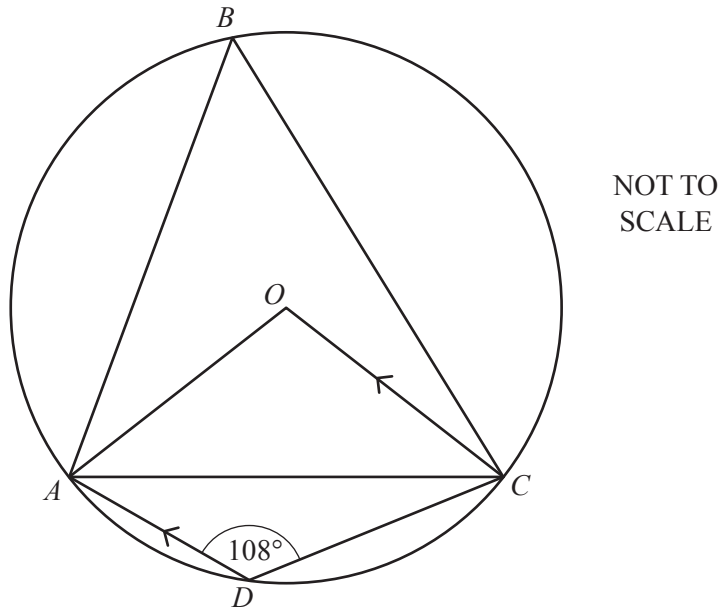
7 (a) Find the value of  $6^0$ .

Answer(a) ..... [1]

(b) Write  $5^{-2}$  as a fraction.

Answer(b) ..... [1]

8



$A, B, C,$  and  $D$  lie on a circle, centre  $O$ .

$AD$  is parallel to  $OC$  and angle  $ADC = 108^\circ$ .

Find

(a) angle  $ABC$ ,

Answer(a) ..... [1]

(b) angle  $AOC$ ,

Answer(b) ..... [1]

(c) angle  $OCA$ ,

Answer(c) ..... [1]

(d) angle  $DAC$ .

Answer(d) ..... [1]

- 9 In triangle  $ABC$ ,  $AB = \sqrt{48}$  cm,  $AC = 8$  cm and angle  $ABC = 90^\circ$ .

Find

- (a)  $BC$ ,

*Answer(a)* ..... cm [3]

- (b) angle  $BAC$ .

*Answer(b)* ..... [2]

---

- 10 The graph of  $y = (x - h)^2 + k$  has a vertex at  $(2, -3)$ .

Find the value of  $h$  and the value of  $k$ .

*Answer*  $h =$  .....

$k =$  ..... [2]

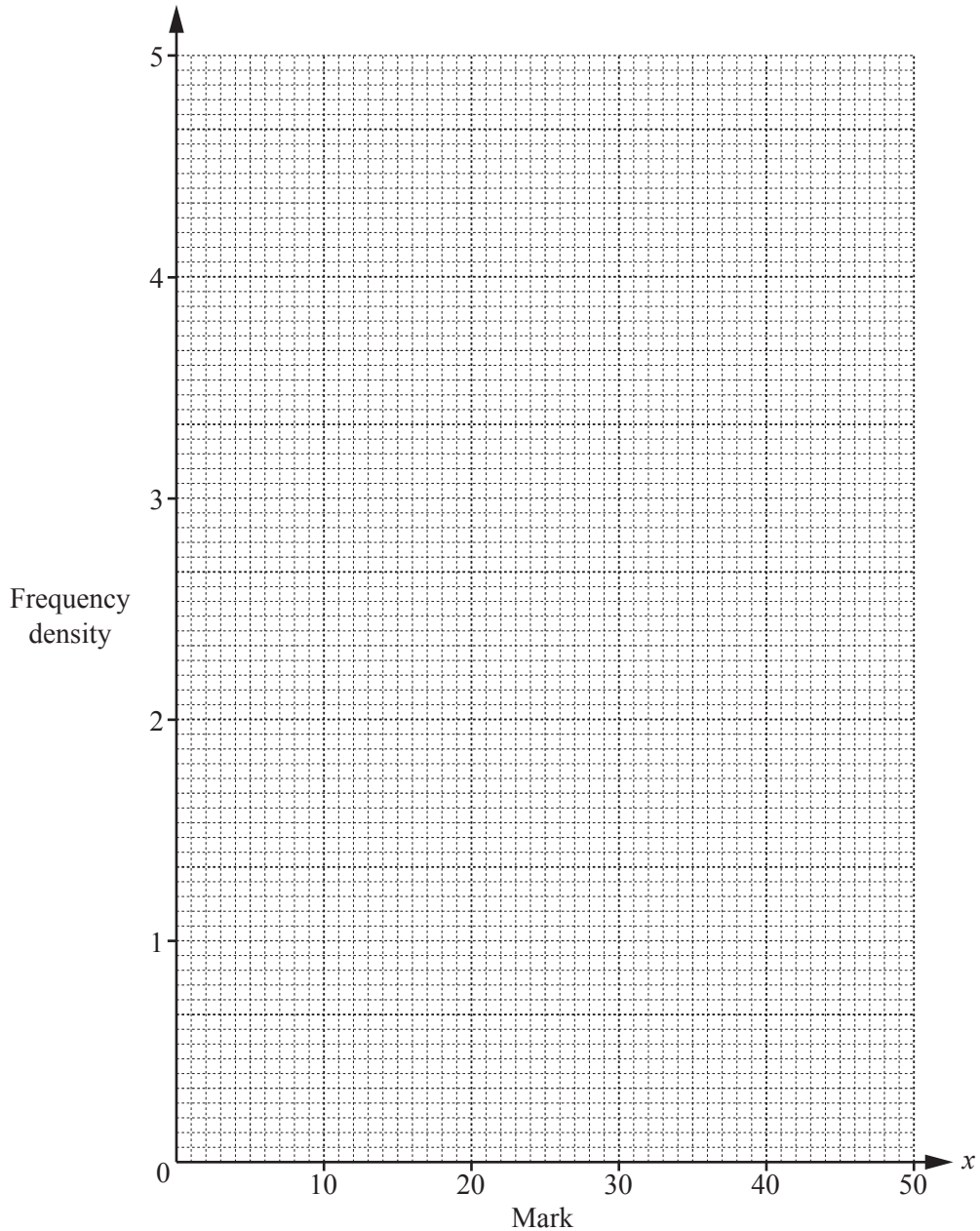
---

**Question 11 is printed on the next page.**

- 11 The table shows the marks of 70 students in an examination.

Mark ( $x$ )	Frequency
$0 < x \leq 10$	8
$10 < x \leq 15$	16
$15 < x \leq 20$	20
$20 < x \leq 30$	12
$30 < x \leq 50$	14

On the grid below, draw a histogram to show this information.



[3]

Permission to reproduce items where third-party owned material protected by copyright is included has been sought and cleared where possible. Every reasonable effort has been made by the publisher (UCLES) to trace copyright holders, but if any items requiring clearance have unwittingly been included, the publisher will be pleased to make amends at the earliest possible opportunity.

To avoid the issue of disclosure of answer-related information to candidates, all copyright acknowledgements are reproduced online in the Cambridge International Examinations Copyright Acknowledgements Booklet. This is produced for each series of examinations and is freely available to download at [www.cie.org.uk](http://www.cie.org.uk) after the live examination series.

Cambridge International Examinations is part of the Cambridge Assessment Group. Cambridge Assessment is the brand name of University of Cambridge Local Examinations Syndicate (UCLES), which is itself a department of the University of Cambridge.