



Cambridge IGCSE™

CANDIDATE
NAME

| |
|--|
| |
|--|

CENTRE
NUMBER

| | | | | |
|--|--|--|--|--|
| | | | | |
|--|--|--|--|--|

CANDIDATE
NUMBER

| | | | |
|--|--|--|--|
| | | | |
|--|--|--|--|



ADDITIONAL MATHEMATICS

0606/23

Paper 2

May/June 2024

2 hours

You must answer on the question paper.

No additional materials are needed.

INSTRUCTIONS

- Answer **all** questions.
- Use a black or dark blue pen. You may use an HB pencil for any diagrams or graphs.
- Write your name, centre number and candidate number in the boxes at the top of the page.
- Write your answer to each question in the space provided.
- Do **not** use an erasable pen or correction fluid.
- Do **not** write on any bar codes.
- You should use a calculator where appropriate.
- You must show all necessary working clearly; no marks will be given for unsupported answers from a calculator.
- Give non-exact numerical answers correct to 3 significant figures, or 1 decimal place for angles in degrees, unless a different level of accuracy is specified in the question.

INFORMATION

- The total mark for this paper is 80.
- The number of marks for each question or part question is shown in brackets [].

This document has **12** pages.

Mathematical Formulae**1. ALGEBRA***Quadratic Equation*

For the equation $ax^2 + bx + c = 0$,

$$x = \frac{-b \pm \sqrt{b^2 - 4ac}}{2a}$$

Binomial Theorem

$$(a + b)^n = a^n + \binom{n}{1}a^{n-1}b + \binom{n}{2}a^{n-2}b^2 + \dots + \binom{n}{r}a^{n-r}b^r + \dots + b^n$$

where n is a positive integer and $\binom{n}{r} = \frac{n!}{(n-r)!r!}$

Arithmetic series $u_n = a + (n-1)d$

$$S_n = \frac{1}{2}n(a+l) = \frac{1}{2}n\{2a + (n-1)d\}$$

Geometric series $u_n = ar^{n-1}$

$$S_n = \frac{a(1-r^n)}{1-r} \quad (r \neq 1)$$

$$S_\infty = \frac{a}{1-r} \quad (|r| < 1)$$

2. TRIGONOMETRY*Identities*

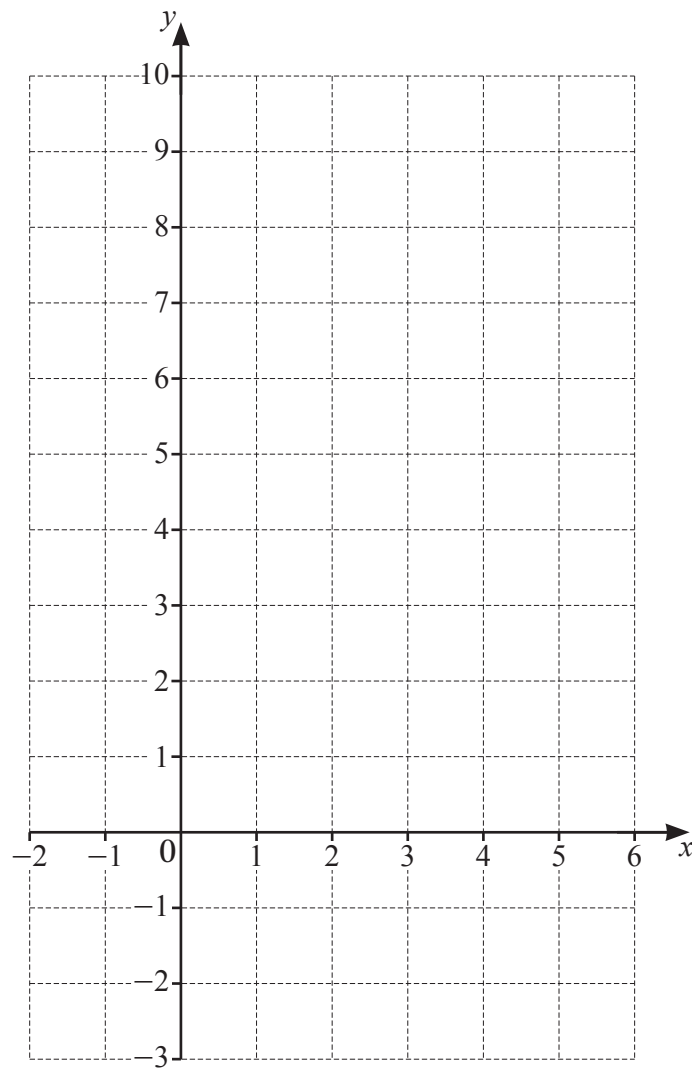
$$\begin{aligned} \sin^2 A + \cos^2 A &= 1 \\ \sec^2 A &= 1 + \tan^2 A \\ \operatorname{cosec}^2 A &= 1 + \cot^2 A \end{aligned}$$

Formulae for $\triangle ABC$

$$\begin{aligned} \frac{a}{\sin A} &= \frac{b}{\sin B} = \frac{c}{\sin C} \\ a^2 &= b^2 + c^2 - 2bc \cos A \\ \Delta &= \frac{1}{2}bc \sin A \end{aligned}$$

- 1 The point A has coordinates $(1, 4)$ and the point B has coordinates $(5, 6)$. The perpendicular bisector of AB intersects the x -axis at the point C and the y -axis at the point D . Given that O is the origin, find the area of triangle OCD . [5]
- 2 Given that the equation $kx^2 + (2k - 1)x + k + 1 = 0$ has no real roots, find the set of possible values of k . [4]

3 (a)



Draw the graphs of $y = |2x - 5|$ and $y = |4 - x|$ for $-2 \leq x \leq 6$.

[4]

(b) Use your graphs to solve the inequality $|4 - x| \leq |2x - 5|$.

[2]

- 4 (a) Find and simplify the term independent of x in the expansion of $\left(x^2 - \frac{1}{2x^3}\right)^{10}$. [2]

(b) DO NOT USE A CALCULATOR IN THIS PART OF THE QUESTION.

- (i) Use the binomial theorem to show that $(1 + 2\sqrt{2})^4 - (1 - 2\sqrt{2})^4 = k\sqrt{2}$, where k is an integer to be found. [4]

- (ii) Hence write $\frac{(1 + 2\sqrt{2})^4 - (1 - 2\sqrt{2})^4}{1 + \sqrt{2}}$ in the form $a + b\sqrt{2}$, where a and b are integers. [2]

5 (a) The function f is defined by $f(x) = \frac{1+2\sin^2x}{\cos^2x}$ for $-\frac{\pi}{2} < x < \frac{\pi}{2}$.

(i) Show that $f(x)$ can be written as $a\tan^2x + b$, where a and b are integers. [2]

(ii) Hence solve the equation $f(x) = 4$. [3]

(iii) Hence also find the gradient of the curve $y = f(x)$ at each of the points where $y = 4$. [4]

(b) Solve the equation $50 \cos^2 \theta = 5 \sin \theta + 47$ for $0^\circ \leq \theta \leq 360^\circ$.

[5]

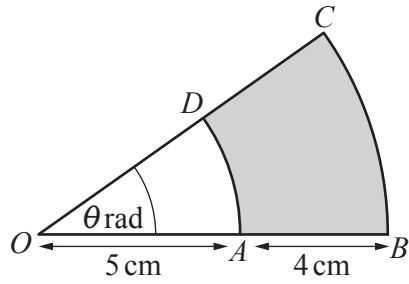
6 DO NOT USE A CALCULATOR IN THIS QUESTION.

(a) Given that $x-3$ and $x+1$ are both factors of $2x^3 - 3x^2 - 8x - 3$, solve the equation $2x^3 - 3x^2 - 8x - 3 = 0$. [2]

(b) The polynomial $p(x) = x^3 + ax^2 + bx + c$, where a , b and c are constants, has remainder -5 when divided by $x-1$. The curve $y = p(x)$ has stationary points at $x = \frac{4}{3}$ and $x = 2$.

(i) Find the values of a , b and c . [7]

(ii) Hence use the second derivative test to show that the stationary point at $x = 2$ is a minimum. [2]

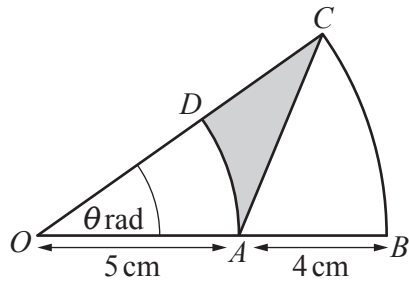


In the diagram, AD and BC are arcs of circles with common centre O .
 ODC and OAB are straight lines with $OA = 5$ cm and $AB = 4$ cm. Angle $BOC = \theta$ radians.
 The area of the shaded region $ABCD$ is 4π cm².

(a) Find θ .

[3]

(b)

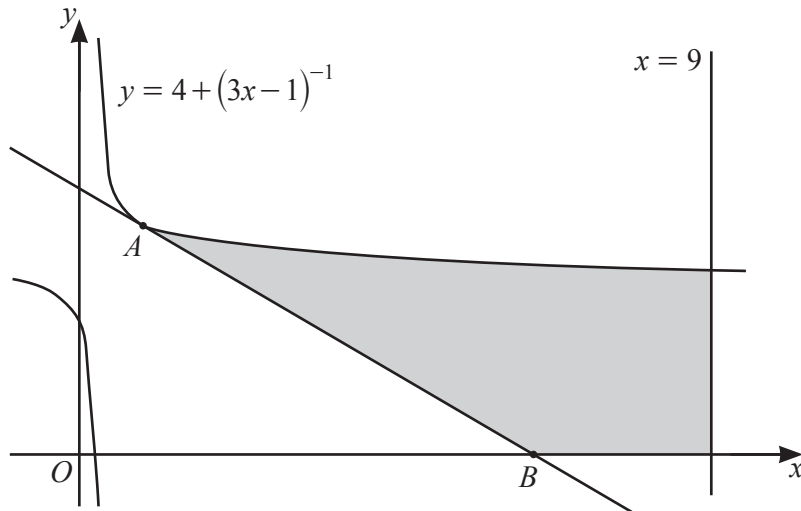


The straight line AC is added to the diagram and the region ACD is now shaded.
 Find the perimeter of the shaded region ACD .

[5]

- 8 A curve is such that $\frac{d^2y}{dx^2} = \cos\left(4x - \frac{\pi}{4}\right)$. Given that $\frac{dy}{dx} = \frac{3}{4}$ at the point $\left(\frac{3\pi}{16}, \frac{\pi}{4}\right)$ on the curve, find the equation of the curve. [7]

9

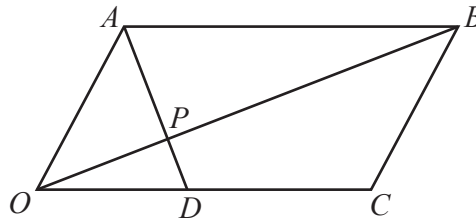


The diagram shows a sketch of part of the curve $y = 4 + (3x - 1)^{-1}$ and the line $x = 9$. The point A has x -coordinate 1. The tangent to the curve at A meets the x -axis at the point B . Find the area of the shaded region.

[10]

Question 10 is printed on the next page.

10



The diagram shows a parallelogram $OABC$. The point D divides the line OC in the ratio $2 : 3$.

$$\vec{OA} = \mathbf{a} \text{ and } \vec{OC} = \mathbf{c}$$

The point P lies on AD such that $\vec{OP} = \lambda \vec{OB}$ and $\vec{AP} = \mu \vec{AD}$, where λ and μ are scalars.

Find two expressions for \vec{OP} , each in terms of \mathbf{a} , \mathbf{c} and a scalar, and hence show that P divides both DA and OB in the ratio $m : n$, where m and n are integers to be found. [7]

Permission to reproduce items where third-party owned material protected by copyright is included has been sought and cleared where possible. Every reasonable effort has been made by the publisher (UCLES) to trace copyright holders, but if any items requiring clearance have unwittingly been included, the publisher will be pleased to make amends at the earliest possible opportunity.

To avoid the issue of disclosure of answer-related information to candidates, all copyright acknowledgements are reproduced online in the Cambridge Assessment International Education Copyright Acknowledgements Booklet. This is produced for each series of examinations and is freely available to download at www.cambridgeinternational.org after the live examination series.

Cambridge Assessment International Education is part of Cambridge Assessment. Cambridge Assessment is the brand name of the University of Cambridge Local Examinations Syndicate (UCLES), which is a department of the University of Cambridge.