



Cambridge IGCSE™

CANDIDATE NAME



CENTRE NUMBER

--	--	--	--	--

CANDIDATE NUMBER

--	--	--	--

* 7 2 1 8 5 0 3 6 6 2 *

CHEMISTRY

0620/61

Paper 6 Alternative to Practical

October/November 2024

1 hour

You must answer on the question paper.

No additional materials are needed.

INSTRUCTIONS

- Answer **all** questions.
- Use a black or dark blue pen. You may use an HB pencil for any diagrams or graphs.
- Write your name, centre number and candidate number in the boxes at the top of the page.
- Write your answer to each question in the space provided.
- Do **not** use an erasable pen or correction fluid.
- Do **not** write on any bar codes.
- You may use a calculator.
- You should show all your working and use appropriate units.

INFORMATION

- The total mark for this paper is 40.
- The number of marks for each question or part question is shown in brackets [].
- Notes for use in qualitative analysis are provided in the question paper.

This document has **16** pages. Any blank pages are indicated.





- 1 A student has a mixture of copper(II) carbonate powder and crystals of sodium sulfate. Copper(II) carbonate is insoluble in water. Sodium sulfate is soluble in water.

The student tries to obtain pure copper(II) carbonate and crystals of pure sodium sulfate from the mixture. Fig. 1.1 shows four of the steps the student carries out.

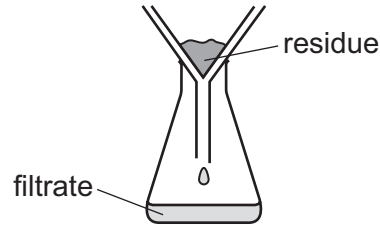
step 1

Add distilled water to the mixture and stir.



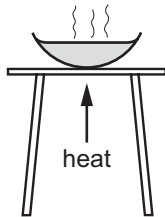
step 2

Filter the mixture.



step 3

Heat the filtrate from **step 2** until crystals start to form.



step 4

Leave the residue on the filter paper from **step 2** in a warm place to dry.

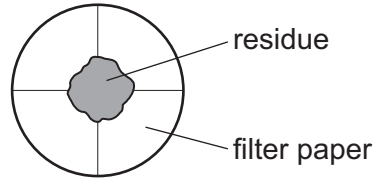


Fig. 1.1

- (a) State what happens to the sodium sulfate in **step 1**.

..... [1]

- (b) State what is removed from the filtrate in **step 3**.

..... [1]

- (c) Describe what must be done after the filtrate has been heated in **step 3** to obtain a larger amount of sodium sulfate crystals.

.....
 [1]

DO NOT WRITE IN THIS MARGIN





(d) (i) State what must be done to the residue before it is allowed to dry in **step 4** to obtain pure copper(II) carbonate.

.....
..... [1]

(ii) Identify the substance removed from the copper(II) carbonate in (d)(i).

..... [1]

[Total: 5]

DO NOT WRITE IN THIS MARGIN







- 2 A student investigates the reaction between aqueous magnesium sulfate and aqueous barium nitrate.
A precipitate of barium sulfate forms in the reaction.

The student does eight experiments.

Experiment 1

- Fill a burette with aqueous magnesium sulfate. Run some of the aqueous magnesium sulfate out of the burette so that the level of the aqueous magnesium sulfate is on the burette scale.
- Fill a second burette with aqueous barium nitrate. Run some of the aqueous barium nitrate out of the burette so that the level of the aqueous barium nitrate is on the burette scale.
- Add 4.0 cm^3 of aqueous magnesium sulfate from the first burette into a 10 cm^3 measuring cylinder.
- Add 1.0 cm^3 of aqueous barium nitrate from the second burette into the same measuring cylinder.
- Place a stopper in the top of the measuring cylinder and invert the measuring cylinder several times.
- Leave the measuring cylinder to stand for 15 minutes.
- Record the level of the precipitate on the measuring cylinder scale.
- Rinse the measuring cylinder with distilled water.

Experiment 2

- Repeat Experiment 1 using 1.5 cm^3 of aqueous barium nitrate instead of 1.0 cm^3 .

Experiment 3

- Repeat Experiment 1 using 2.5 cm^3 of aqueous barium nitrate instead of 1.0 cm^3 .

Experiment 4

- Repeat Experiment 1 using 3.0 cm^3 of aqueous barium nitrate instead of 1.0 cm^3 .

Experiment 5

- Repeat Experiment 1 using 3.5 cm^3 of aqueous barium nitrate instead of 1.0 cm^3 .

Experiment 6

- Repeat Experiment 1 using 4.5 cm^3 of aqueous barium nitrate instead of 1.0 cm^3 .

Experiment 7

- Repeat Experiment 1 using 5.0 cm^3 of aqueous barium nitrate instead of 1.0 cm^3 .

Experiment 8

- Repeat Experiment 1 using 5.5 cm^3 of aqueous barium nitrate instead of 1.0 cm^3 .





(a) Use the information in the description of the experiments and the measuring cylinder diagrams to complete Table 2.1.

Table 2.1

experiment	1	2	3	4	5	6	7	8
volume of aqueous magnesium sulfate / cm ³	4.0							
volume of aqueous barium nitrate / cm ³	1.0							
measuring cylinder diagram								
level of precipitate on the measuring cylinder scale / cm ³	1.2							

[4]





- (b) Complete a suitable scale on the y-axis and plot the results from Experiments 1 to 8 on Fig. 2.1. Draw **two** straight lines of best fit through your points. The first straight line should be for the first five experiments and must be extended to pass through (0,0). The second straight line should be for the last three experiments and must be horizontal. Extend the straight lines so that they cross each other.

level of precipitate
on the measuring
cylinder scale / cm³

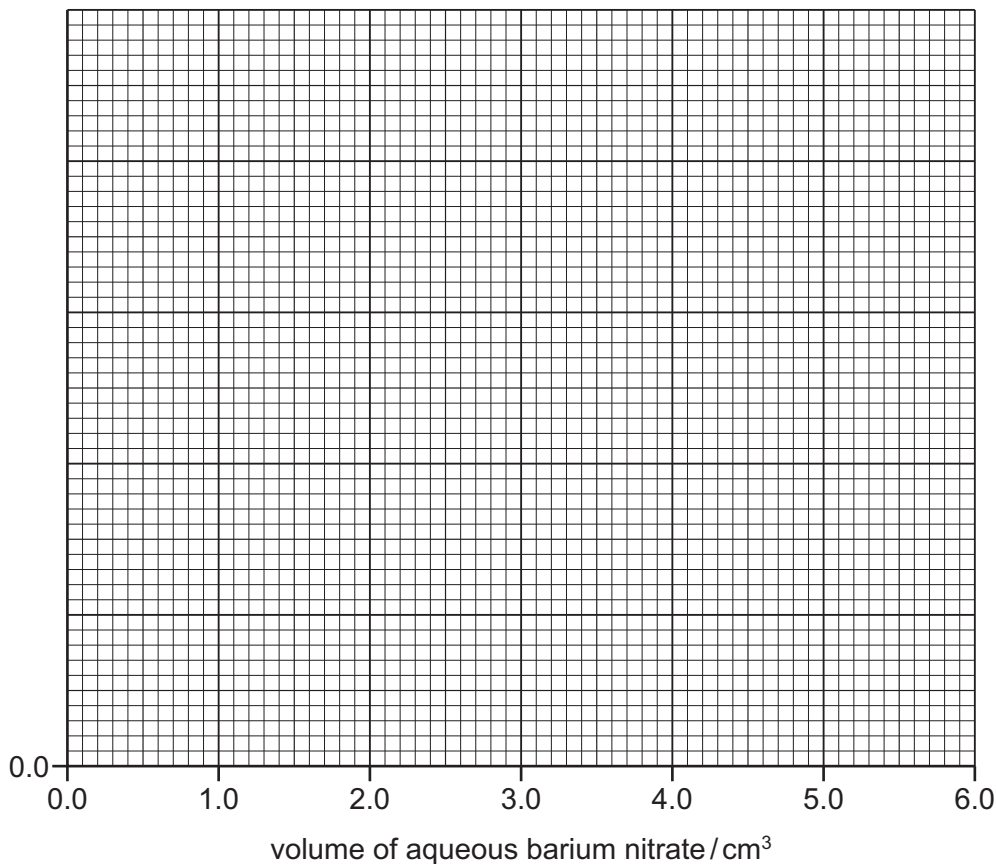


Fig. 2.1

[5]

- (c) Use Fig. 2.1 to deduce the level of precipitate on the measuring cylinder scale when the experiment is repeated using 2.8 cm³ of aqueous barium nitrate. Show clearly on Fig. 2.1 how you worked out your answer.

level of precipitate = cm³ [2]

- (d) The student repeats the experiment using 6.5 cm³ of aqueous barium nitrate.

Predict the level of precipitate on the measuring cylinder scale.

Explain your answer.

prediction

explanation

.....

[2]



DO NOT WRITE IN THIS MARGIN



(e) Sketch on Fig. 2.1 the graph obtained if all of the experiments are repeated using aqueous barium nitrate of half the concentration used in Experiments 1 to 8. [2]

(f) Suggest why the measuring cylinder is inverted several times after the aqueous barium nitrate is added.

.....
..... [1]

(g) Suggest why the measuring cylinder is left to stand before the level of the precipitate is recorded.

.....
..... [1]

(h) The volumes of both aqueous solutions are measured using burettes.

(i) Give a reason why burettes are used rather than measuring cylinders.

.....
..... [1]

(ii) Suggest why burettes are used rather than volumetric pipettes.

.....
..... [1]

[Total: 19]

DO NOT WRITE IN THIS MARGIN





3 A student tests two solids: solid **T** and solid **U**.

Tests on solid T

Solid **T** is lithium sulfite.

Complete the expected observations.

(a) The student carries out a flame test on solid **T**.

observations [1]

The student dissolves the remaining solid **T** in water to form solution **T**.

The student divides solution **T** into two portions.

(b) The student adds the first portion of solution **T** to a test-tube containing acidified aqueous potassium manganate(VII).

State the colour change.

from to [2]

(c) (i) To the second portion of solution **T**, the student adds excess dilute nitric acid. The gas produced turns filter paper soaked in acidified aqueous potassium manganate(VII) white.

Identify the gas produced.

..... [1]

(ii) To the solution produced in (c)(i), the student adds aqueous barium nitrate.

observations [1]

DO NOT WRITE IN THIS MARGIN





Tests on solid U

Solid **U** contains one cation and one anion.

Table 3.1 shows the tests and the student's observations for solid **U**.

The student dissolves solid **U** in distilled water to form solution **U**. The student then divides solution **U** into three portions.

Table 3.1

tests	observations
<p>test 1</p> <p>To the first portion of solution U, add a few drops of aqueous ammonia.</p>	green precipitate
<p>test 2</p> <p>To the second portion of solution U, add 1 cm³ of dilute nitric acid followed by a few drops of aqueous silver nitrate.</p>	yellow precipitate
<p>test 3</p> <p>To the third portion of solution U, add 1 cm³ of aqueous chlorine.</p>	the solution turns brown

(d) Identify **two** cations that the tests and observations in Table 3.1 show could be in solid **U**.

.....
 [2]

(e) Describe an additional test that the student could do to confirm which one of the two cations identified in (d) is in solid **U**.

Give the expected result for **one** of the cations.

test

cation

result [2]

(f) Identify the anion in solid **U**.

..... [1]

[Total: 10]





BLANK PAGE

DO NOT WRITE IN THIS MARGIN

DO NOT WRITE IN THIS MARGIN

DO NOT WRITE IN THIS MARGIN

DO NOT WRITE IN THIS MARGIN

DO NOT WRITE IN THIS MARGIN



* 00080000013 *



13

BLANK PAGE



DO NOT WRITE IN THIS MARGIN







Notes for use in qualitative analysis

Tests for anions

anion	test	test result
carbonate, CO_3^{2-}	add dilute acid, then test for carbon dioxide gas	effervescence, carbon dioxide produced
chloride, Cl^- [in solution]	acidify with dilute nitric acid, then add aqueous silver nitrate	white ppt.
bromide, Br^- [in solution]	acidify with dilute nitric acid, then add aqueous silver nitrate	cream ppt.
iodide, I^- [in solution]	acidify with dilute nitric acid, then add aqueous silver nitrate	yellow ppt.
nitrate, NO_3^- [in solution]	add aqueous sodium hydroxide, then aluminium foil; warm carefully	ammonia produced
sulfate, SO_4^{2-} [in solution]	acidify with dilute nitric acid, then add aqueous barium nitrate	white ppt.
sulfite, SO_3^{2-}	add a small volume of acidified aqueous potassium manganate(VII)	the acidified aqueous potassium manganate(VII) changes colour from purple to colourless

Tests for aqueous cations

cation	effect of aqueous sodium hydroxide	effect of aqueous ammonia
aluminium, Al^{3+}	white ppt., soluble in excess, giving a colourless solution	white ppt., insoluble in excess
ammonium, NH_4^+	ammonia produced on warming	–
calcium, Ca^{2+}	white ppt., insoluble in excess	no ppt. or very slight white ppt.
chromium(III), Cr^{3+}	green ppt., soluble in excess	green ppt., insoluble in excess
copper(II), Cu^{2+}	light blue ppt., insoluble in excess	light blue ppt., soluble in excess, giving a dark blue solution
iron(II), Fe^{2+}	green ppt., insoluble in excess, ppt. turns brown near surface on standing	green ppt., insoluble in excess, ppt. turns brown near surface on standing
iron(III), Fe^{3+}	red-brown ppt., insoluble in excess	red-brown ppt., insoluble in excess
zinc, Zn^{2+}	white ppt., soluble in excess, giving a colourless solution	white ppt., soluble in excess, giving a colourless solution





Tests for gases

gas	test and test result
ammonia, NH_3	turns damp red litmus paper blue
carbon dioxide, CO_2	turns limewater milky
chlorine, Cl_2	bleaches damp litmus paper
hydrogen, H_2	'pops' with a lighted splint
oxygen, O_2	relights a glowing splint
sulfur dioxide, SO_2	turns acidified aqueous potassium manganate(VII) from purple to colourless

Flame tests for metal ions

metal ion	flame colour
lithium, Li^+	red
sodium, Na^+	yellow
potassium, K^+	lilac
calcium, Ca^{2+}	orange-red
barium, Ba^{2+}	light green
copper(II), Cu^{2+}	blue-green

Permission to reproduce items where third-party owned material protected by copyright is included has been sought and cleared where possible. Every reasonable effort has been made by the publisher (UCLES) to trace copyright holders, but if any items requiring clearance have unwittingly been included, the publisher will be pleased to make amends at the earliest possible opportunity.

To avoid the issue of disclosure of answer-related information to candidates, all copyright acknowledgements are reproduced online in the Cambridge Assessment International Education Copyright Acknowledgements Booklet. This is produced for each series of examinations and is freely available to download at www.cambridgeinternational.org after the live examination series.

Cambridge Assessment International Education is part of Cambridge Assessment. Cambridge Assessment is the brand name of the University of Cambridge Local Examinations Syndicate (UCLES), which is a department of the University of Cambridge.

