



Cambridge IGCSE™

CANDIDATE NAME



CENTRE NUMBER

--	--	--	--	--

CANDIDATE NUMBER

--	--	--	--

* 8 9 1 8 4 5 0 5 8 3 *

CHEMISTRY

0620/31

Paper 3 Theory (Core)

October/November 2024

1 hour 15 minutes

You must answer on the question paper.

No additional materials are needed.

INSTRUCTIONS

- Answer **all** questions.
- Use a black or dark blue pen. You may use an HB pencil for any diagrams or graphs.
- Write your name, centre number and candidate number in the boxes at the top of the page.
- Write your answer to each question in the space provided.
- Do **not** use an erasable pen or correction fluid.
- Do **not** write on any bar codes.
- You may use a calculator.
- You should show all your working and use appropriate units.

INFORMATION

- The total mark for this paper is 80.
- The number of marks for each question or part question is shown in brackets [].
- The Periodic Table is printed in the question paper.

This document has **20** pages. Any blank pages are indicated.





1 (a) Fig. 1.1 shows part of the Periodic Table.

I		II												III	IV	V	VI	VII	VIII	
				H																
Na												Al		P	S	Cl	Ar			
K	Ca										Ni					Br				
																I				

Fig. 1.1

Answer the following questions using only the elements in Fig. 1.1. Each symbol of the element may be used once, more than once or not at all.

Give the symbol of the element that:

- (i) produces a lilac colour in a flame test
..... [1]
- (ii) has an atom with only two occupied electron shells
..... [1]
- (iii) is an unreactive gas
..... [1]
- (iv) forms an ion that gives a white precipitate after the addition of excess sodium hydroxide
..... [1]
- (v) forms an ion with a charge of 2-
..... [1]
- (vi) is added to iron to make stainless steel.
..... [1]

(b) Stainless steel is a mixture.

State **two** characteristics of a mixture.

- 1
 - 2
- [2]

[Total: 8]

DO NOT WRITE IN THIS MARGIN



* 000800000003 *



3



Question 2 starts on the next page.

DO NOT WRITE IN THIS MARGIN





2 Nitrogen molecules are diatomic.

(a) (i) State the meaning of the term diatomic.

..... [1]

(ii) State the percentage of nitrogen in clean, dry air.

..... [1]

(b) Ammonia has a simple molecular structure.

Complete Fig. 2.1 to show the dot-and-cross diagram for a molecule of ammonia. Show outer shell electrons only.

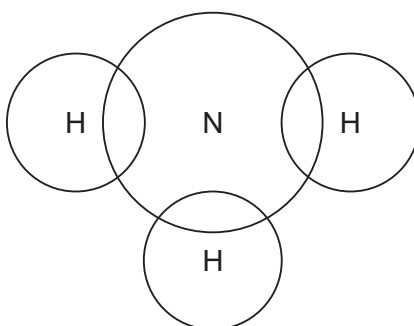


Fig. 2.1

[2]

(c) Sodium chloride has a giant ionic structure of positive and negative ions.

(i) State the general name given to any positive ion.

..... [1]

(ii) State **one** physical property of an ionic compound.

..... [1]

DO NOT WRITE IN THIS MARGIN





(d) Graphite is used as an electrode.

(i) State one **other** use of graphite.

..... [1]

(ii) Choose the correct statement that describes the structure and bonding in graphite.

Tick (✓) **one** box.

simple covalent molecule

giant ionic

simple ionic

giant covalent

[1]

[Total: 8]

DO NOT WRITE IN THIS MARGIN





3 (a) Polluted water can contain harmful substances such as plastics and phosphates.

State two **other** types of harmful substance in polluted water.

1

2

[2]

(b) Table 3.1 shows the masses of ions, in mg, present in a 1000 cm³ sample of polluted water.

Table 3.1

name of ion	formula of ion	mass of ion in 1000 cm ³ of polluted water / mg
ammonium	NH ₄ ⁺	0.6
bromide	Br ⁻	0.3
calcium	Ca ²⁺	2.5
chloride	Cl ⁻	2.5
hydrogencarbonate	HCO ₃ ⁻	12.0
magnesium	Mg ²⁺	0.8
	NO ₃ ⁻	0.4
phosphate	PO ₄ ³⁻	0.5
potassium	K ⁺	5.3
silicate	SiO ₃ ²⁻	3.0
sodium	Na ⁺	9.2
sulfate	SO ₄ ²⁻	0.5

Answer these questions using the information from Table 3.1.

(i) Name the negative ion that has the lowest concentration.

..... [1]

(ii) State the name of the NO₃⁻ ion.

..... [1]

(iii) Calculate the mass of sodium ions in 250 cm³ of polluted water.

mass = mg [1]

DO NOT WRITE IN THIS MARGIN

DO NOT WRITE IN THIS MARGIN

DO NOT WRITE IN THIS MARGIN

DO NOT WRITE IN THIS MARGIN

DO NOT WRITE IN THIS MARGIN





(c) Fig. 3.1 shows some of the stages in the treatment of the domestic water supply.

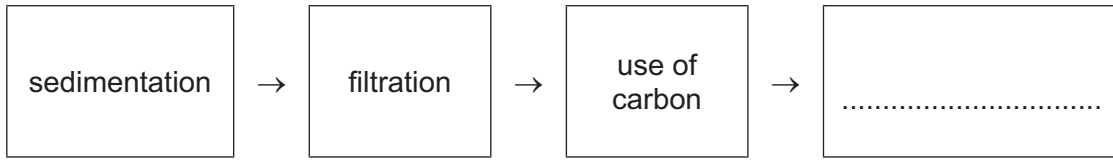


Fig. 3.1

(i) Complete Fig. 3.1 by adding the final stage. [1]

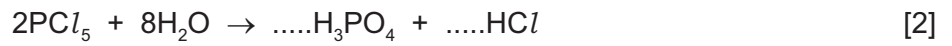
(ii) State why carbon is added to drinking water.

..... [1]

(d) Describe how to test the purity of water using melting point.

.....
.....
.....
..... [2]

(e) Complete the symbol equation for the reaction of phosphorus(V) chloride, PCl_5 , with water.



[Total: 11]

DO NOT WRITE IN THIS MARGIN





4 (a) Fig. 4.1 shows the displayed formula of compound **A**.

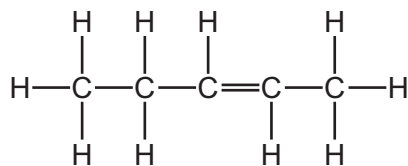


Fig. 4.1

(i) Explain why compound **A** is described as unsaturated.

.....
 [1]

(ii) Explain why compound **A** is a hydrocarbon.

.....
 [1]

(iii) Deduce the molecular formula of compound **A**.

..... [1]

(b) Compound **A** reacts with steam to produce an alcohol.

(i) State the general formula for the homologous series of alcohols.

..... [1]

(ii) Ethanol is an alcohol which can be manufactured by fermentation.

- Name **two** substances needed for fermentation.

1

2

- Give **two** conditions needed for fermentation.

1

2

[4]

(iii) State **one** use of ethanol.

..... [1]





(c) A compound in the same homologous series as compound **A** reacts with ozone, O₃, to form compound **B**.

(i) Define the term homologous series.

.....
..... [2]

(ii) The molecular formula for compound **B** is C₆H₁₂O₃.

Complete Table 4.1 to calculate the relative molecular mass of C₆H₁₂O₃.

Table 4.1

type of atom	number of atoms	relative atomic mass	
carbon	6	12	6 × 12 = 72
hydrogen		1	
oxygen		16	

relative molecular mass = [2]

[Total: 13]

DO NOT WRITE IN THIS MARGIN





5 (a) Table 5.1 shows some properties of five halogens.

Table 5.1

halogen	melting point /°C	boiling point /°C	atomic radius /nm
fluorine	-220	-188	
chlorine	-101	-35	0.099
bromine	-7	+59	0.114
iodine		+184	0.133
astatine	+302	+337	0.155

Use the information in Table 5.1 to predict:

- (i) the melting point of iodine [1]
- (ii) the atomic radius of fluorine [1]
- (iii) the physical state of bromine at 0°C. Give a reason for your answer.

physical state

reason

..... [2]

(b) Aqueous chlorine reacts with aqueous potassium iodide.

(i) Complete the word equation for this reaction.



[2]

(ii) Explain why aqueous iodine does **not** react with aqueous potassium bromide.

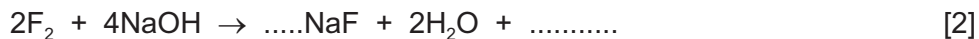
..... [1]





(c) Fluorine reacts with hot concentrated sodium hydroxide to produce sodium fluoride, water and oxygen.

(i) Complete the symbol equation for this reaction.



(ii) Describe a test for oxygen.

test

observations

[2]

[Total: 11]

DO NOT WRITE IN THIS MARGIN





6 This question is about metals.

(a) Metals are good electrical conductors.

State three **other** typical physical properties of metals.

- 1
- 2
- 3 [3]

(b) (i) Complete Table 6.1 to show the number of electrons, neutrons and protons in the potassium atom and the nickel ion shown.

Table 6.1

	number of electrons	number of neutrons	number of protons
$^{41}_{19}\text{K}$	19		
$^{62}_{28}\text{Ni}^{2+}$		34	

[3]

(ii) Write the electronic configuration of the potassium atom.

..... [1]

(c) Choose **one** property from the list that shows that nickel is a transition element.

Tick (✓) **one** box.

- has a low density
- forms coloured compounds
- has a low melting point
- does **not** act as a catalyst


[1]

DO NOT WRITE IN THIS MARGIN





(d) Nickel can be manufactured by reducing nickel(II) oxide with carbon monoxide and hydrogen.



Explain how this equation shows that nickel(II) oxide is reduced.

..... [1]

(e) Table 6.2 shows the observations when four different metals are heated with steam.

Table 6.2

metal	observations with steam
chromium	forms an oxide layer slowly
copper	forms an oxide layer very slowly
magnesium	forms an oxide layer rapidly
niobium	does not form an oxide layer

Put the four metals in order of their reactivity.
Put the least reactive metal first.

least reactive \longrightarrow most reactive

--	--	--	--

[2]

[Total: 11]

DO NOT WRITE IN THIS MARGIN





7 This question is about acids, bases and salts.

(a) Crystals of potassium chloride can be made by reacting an acid with an alkali.

(i) Name the acid and the alkali used.

acid

alkali

[2]

(ii) Choose from the list the type of reaction that takes place when an acid reacts with an alkali.

Draw a circle around your chosen answer.

addition neutralisation redox substitution [1]

(iii) Thymolphthalein is an acid–base indicator.

State the colour of thymolphthalein at pH 2 and at pH 12.

colour at pH 2

colour at pH 12

[2]

(iv) Describe how to make dry crystals of potassium chloride from an aqueous solution of potassium chloride.

.....

.....

.....

..... [2]

DO NOT WRITE IN THIS MARGIN





(b) Crystals of potassium chloride dissolve in water. This process is endothermic.

(i) Define the term endothermic.

.....
..... [1]

(ii) Fig. 7.1 shows the reaction pathway diagram for dissolving potassium chloride in water.

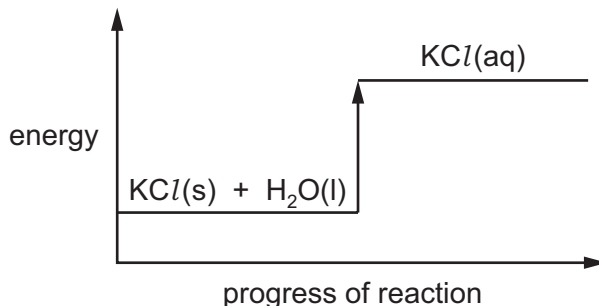


Fig. 7.1

Answer the following questions using the information in Fig. 7.1.

- State the meaning of the state symbol (l).

.....

- Explain how Fig. 7.1 shows that dissolving potassium chloride in water is endothermic.

.....
.....

[2]

[Total: 10]



DO NOT WRITE IN THIS MARGIN



8 (a) A student investigates the reaction of small pieces of zinc with excess dilute sulfuric acid of three different concentrations.
The time taken for each reaction to finish is recorded.

The three concentrations of the acid are:

- 0.2 mol/dm³
- 0.4 mol/dm³
- 0.8 mol/dm³.

All other conditions stay the same.

Table 8.1 shows the time taken for each reaction to finish.

Table 8.1

concentration of dilute sulfuric acid in mol/dm ³	time taken for the reaction to finish in s
	92
	23
	46

(i) Complete Table 8.1 by writing the concentrations in the first column. [1]

(ii) Describe the effect on the time taken for the reaction to finish when the reaction is carried out in the presence of a catalyst.

All other conditions stay the same.

..... [1]

(iii) Describe the effect on the time taken for the reaction to finish when larger pieces of zinc are used instead of small pieces of zinc.

All other conditions stay the same.

..... [1]

DO NOT WRITE IN THIS MARGIN





(b) Dilute sulfuric acid is electrolysed using inert electrodes.

(i) Name the products at the positive and negative electrodes.

product at the positive electrode

product at the negative electrode

[2]

(ii) Choose from the list the metal used as an inert electrode.

Draw a circle around your chosen answer.

calcium

magnesium

platinum

sodium

[1]

(c) Zinc is a solid at room temperature.

Describe the arrangement and separation of the particles in solid zinc.

arrangement

.....

separation

.....

[2]

[Total: 8]

DO NOT WRITE IN THIS MARGIN

DO NOT WRITE IN THIS MARGIN

DO NOT WRITE IN THIS MARGIN

DO NOT WRITE IN THIS MARGIN

DO NOT WRITE IN THIS MARGIN







BLANK PAGE

DO NOT WRITE IN THIS MARGIN

Permission to reproduce items where third-party owned material protected by copyright is included has been sought and cleared where possible. Every reasonable effort has been made by the publisher (UCLES) to trace copyright holders, but if any items requiring clearance have unwittingly been included, the publisher will be pleased to make amends at the earliest possible opportunity.

To avoid the issue of disclosure of answer-related information to candidates, all copyright acknowledgements are reproduced online in the Cambridge Assessment International Education Copyright Acknowledgements Booklet. This is produced for each series of examinations and is freely available to download at www.cambridgeinternational.org after the live examination series.

Cambridge Assessment International Education is part of Cambridge Assessment. Cambridge Assessment is the brand name of the University of Cambridge Local Examinations Syndicate (UCLES), which is a department of the University of Cambridge.





The Periodic Table of Elements

		Group															
I	II	III	IV	V	VI	VII	VIII										
3 Li lithium 7	4 Be beryllium 9	1 H hydrogen 1	5 B boron 11	6 C carbon 12	7 N nitrogen 14	8 O oxygen 16	9 F fluorine 19	10 Ne neon 20					2 He helium 4				
11 Na sodium 23	12 Mg magnesium 24	<p>Key</p> <p>atomic number</p> <p>atomic symbol</p> <p>name</p> <p>relative atomic mass</p>															
19 K potassium 39	20 Ca calcium 40	21 Sc scandium 45	22 Ti titanium 48	23 V vanadium 51	24 Cr chromium 52	25 Mn manganese 55	26 Fe iron 56	27 Co cobalt 59	28 Ni nickel 59	29 Cu copper 64	30 Zn zinc 65	31 Ga gallium 70	32 Ge germanium 73	33 As arsenic 75	34 Se selenium 79	35 Br bromine 80	36 Kr krypton 84
37 Rb rubidium 85	38 Sr strontium 88	39 Y yttrium 89	40 Zr zirconium 91	41 Nb niobium 93	42 Mo molybdenum 96	43 Tc technetium —	44 Ru ruthenium 101	45 Rh rhodium 103	46 Pd palladium 106	47 Ag silver 108	48 Cd cadmium 112	49 In indium 115	50 Sn tin 119	51 Sb antimony 122	52 Te tellurium 128	53 I iodine 127	54 Xe xenon 131
55 Cs caesium 133	56 Ba barium 137	57–71 lanthanoids	72 Hf hafnium 178	73 Ta tantalum 181	74 W tungsten 184	75 Re rhenium 186	76 Os osmium 190	77 Ir iridium 192	78 Pt platinum 195	79 Au gold 197	80 Hg mercury 201	81 Tl thallium 204	82 Pb lead 207	83 Bi bismuth 209	84 Po polonium —	85 At astatine —	86 Rn radon —
87 Fr francium —	88 Ra radium —	89–103 actinoids	104 Rf rutherfordium —	105 Db dubnium —	106 Sg seaborgium —	107 Bh bohrium —	108 Hs hassium —	109 Mt meitnerium —	110 Ds darmstadtium —	111 Rg roentgenium —	112 Cn copernicium —	113 Nh nihonium —	114 Fl flerovium —	115 Mc moscovium —	116 Lv livermorium —	117 Ts tennessine —	118 Og oganesson —

57 La lanthanum 139	58 Ce cerium 140	59 Pr praseodymium 141	60 Nd neodymium 144	61 Pm promethium —	62 Sm samarium 150	63 Eu europium 152	64 Gd gadolinium 157	65 Tb terbium 159	66 Dy dysprosium 163	67 Ho holmium 165	68 Er erbium 167	69 Tm thulium 169	70 Yb ytterbium 173	71 Lu lutetium 175
89 Ac actinium —	90 Th thorium 232	91 Pa protactinium 231	92 U uranium 238	93 Np neptunium —	94 Pu plutonium —	95 Am americium —	96 Cm curium —	97 Bk berkelium —	98 Cf californium —	99 Es einsteinium —	100 Fm fermium —	101 Md mendelevium —	102 No nobelium —	103 Lr lawrencium —

lanthanoids

actinoids

The volume of one mole of any gas is 24 dm³ at room temperature and pressure (r.t.p.).

