



# Cambridge IGCSE™

CANDIDATE  
NAME

CENTRE  
NUMBER

--	--	--	--	--

CANDIDATE  
NUMBER

--	--	--	--



## CHEMISTRY

0620/41

Paper 4 Theory (Extended)

May/June 2024

1 hour 15 minutes

You must answer on the question paper.

No additional materials are needed.

### INSTRUCTIONS

- Answer **all** questions.
- Use a black or dark blue pen. You may use an HB pencil for any diagrams or graphs.
- Write your name, centre number and candidate number in the boxes at the top of the page.
- Write your answer to each question in the space provided.
- Do **not** use an erasable pen or correction fluid.
- Do **not** write on any bar codes.
- You may use a calculator.
- You should show all your working and use appropriate units.

### INFORMATION

- The total mark for this paper is 80.
- The number of marks for each question or part question is shown in brackets [ ].
- The Periodic Table is printed in the question paper.

This document has **16** pages. Any blank pages are indicated.

1 Name the process that is used to:

(a) convert sulfur dioxide into sulfur trioxide in the manufacture of sulfuric acid

..... [1]

(b) obtain water from aqueous sodium chloride

..... [1]

(c) extract aluminium from purified bauxite

..... [1]

(d) separate petroleum into useful substances

..... [1]

(e) produce ethanol from aqueous glucose

..... [1]

(f) manufacture alkenes and hydrogen from large alkane molecules

..... [1]

(g) separate a mixture of soluble coloured substances.

..... [1]

[Total: 7]

2 Complete Table 2.1.

Table 2.1

atom or ion	number of protons	number of electrons	number of neutrons
${}_{17}^{37}\text{Cl}$		17	
${}_{29}^{63}\text{Cu}^+$			34
	16	18	17

[5]

3 This question is about the elements sodium and fluorine and the compound sodium fluoride.

(a) Sodium reacts with fluorine to form sodium fluoride.

Write a symbol equation for this reaction.

..... [2]

(b) Some properties of sodium, fluorine and sodium fluoride are shown in Table 3.1.

**Table 3.1**

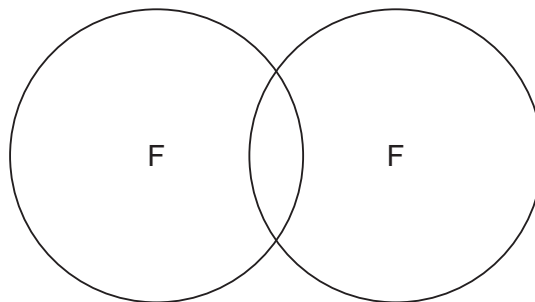
	melting point /°C	boiling point /°C	conduction of electricity when solid	conduction of electricity in aqueous solution
sodium	98	883	good	
fluorine	-220	-188	poor	
sodium fluoride	993	1695	poor	good

(i) Explain why sodium conducts electricity when it is a solid.

..... [1]

(ii) Complete the dot-and-cross diagram in Fig. 3.1 of a molecule of fluorine.

Show outer shell electrons only.



**Fig. 3.1**

[2]

(iii) Deduce the physical state of fluorine at  $-200^{\circ}\text{C}$ . Use the data in Table 3.1 to explain your answer.

physical state .....

explanation .....

.....

[2]

- (iv) Explain in terms of structure and bonding why sodium fluoride has a much higher melting point than fluorine.

.....  
.....  
.....  
.....  
..... [3]

- (c) Dilute aqueous sodium fluoride undergoes electrolysis.

Hydrogen is produced at the cathode.

- (i) State what is meant by the term electrolysis.

.....  
.....  
..... [2]

- (ii) Write an ionic half-equation for the production of hydrogen at the cathode.

..... [2]

[Total: 14]

- 4 Hydrogen iodide thermally decomposes into iodine and hydrogen. The reaction is reversible.

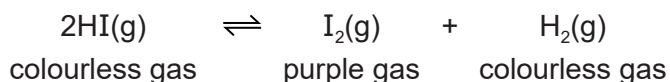


Fig. 4.1 shows a gas syringe containing a mixture of hydrogen iodide, iodine and hydrogen gases. The gas syringe is sealed and the mixture is heated to 300°C. The mixture of gases reaches equilibrium and is purple.

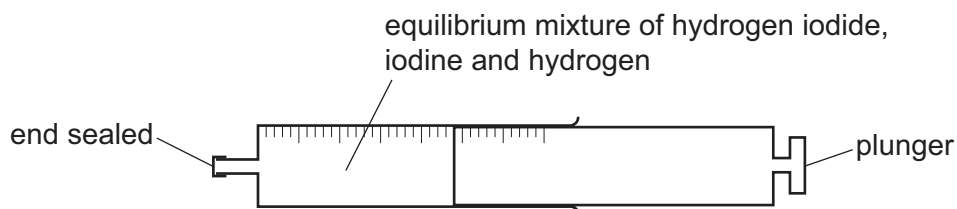


Fig. 4.1

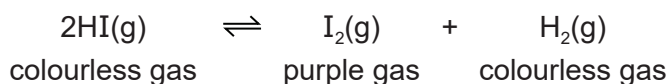
- (a) State what is meant by the term equilibrium.

.....  
 .....  
 ..... [2]

- (b) The pressure of the mixture is increased. All other conditions stay the same. The position of equilibrium does **not** change.

The colour of the gaseous mixture turns darker purple.

The temperature remains constant.



- (i) Explain why the position of equilibrium does **not** change.

.....  
 ..... [1]

- (ii) Suggest why the colour of the mixture of gases turns darker purple.

.....  
 ..... [1]

(c) The temperature of the mixture of gases is decreased. All other conditions stay the same.

The mixture of gases turns lighter purple.

State what can be deduced about the forward reaction from this information.

..... [1]

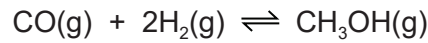
(d) Deduce the oxidation number of iodine, I, in:

HI .....

I<sub>2</sub> .....

[2]

(e) Methanol is manufactured by reacting carbon monoxide with hydrogen.



The rate of formation of methanol increases when a catalyst is used.

(i) Choose from the list the element that is most likely to be used as the catalyst.

Draw a circle around your chosen answer.

**calcium    carbon    copper    sodium    sulfur** [1]

(ii) State the effect on the position of equilibrium when a catalyst is used.

..... [1]

(iii) State the effect that a catalyst has on the activation energy,  $E_a$ , of a reaction.

..... [1]

[Total: 10]

5 (a) Lead(II) bromide,  $\text{PbBr}_2$ , is an insoluble salt and is made by precipitation.

(i) Name **two** aqueous solutions that produce a precipitate of lead(II) bromide when they are mixed.

1 .....

2 ..... [2]

(ii) Describe how to produce a pure sample of lead(II) bromide from the mixture of aqueous solutions in (a)(i).

.....

..... [2]

(iii) Write an ionic equation for the precipitation reaction which produces lead(II) bromide. Include state symbols.

..... [3]

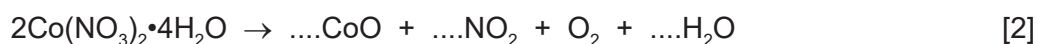
(b) When iron(II) sulfate crystals are heated strongly, sulfur dioxide gas is given off.

Describe a test for sulfur dioxide gas.

test .....

observations ..... [2]

(c) Complete the equation for the thermal decomposition of hydrated cobalt(II) nitrate.





(d) Hydrated cobalt(II) sulfate,  $\text{CoSO}_4 \cdot x\text{H}_2\text{O}$ , produces water when it is heated.



A student does an experiment to determine the value of  $x$  in  $\text{CoSO}_4 \cdot x\text{H}_2\text{O}$ .

**step 1** The student weighs a sample of hydrated cobalt(II) sulfate.

**step 2** The student heats the sample of hydrated cobalt(II) sulfate.

**step 3** The student weighs the remaining solid after heating.

(i) Describe what else the student should do to ensure that **all** the water has been given off. No other substances are required.

.....  
 .....  
 ..... [2]

(ii) In an experiment, 1.405 g of  $\text{CoSO}_4 \cdot x\text{H}_2\text{O}$  is heated until all the water is given off.

The mass of  $\text{CoSO}_4$  that remains is 0.775 g.

[ $M_r$ :  $\text{CoSO}_4$ , 155;  $\text{H}_2\text{O}$ , 18]

Determine the value of  $x$  using the following steps.

- Calculate the number of moles of  $\text{CoSO}_4$  that remains.

..... mol

- Calculate the mass of  $\text{H}_2\text{O}$  given off.

..... g

- Calculate the number of moles of  $\text{H}_2\text{O}$  given off.

..... mol

- Determine the value of  $x$ .

$x =$  .....  
 [4]

[Total: 17]

6 This question is about metals.

(a) Fig. 6.1 shows a blast furnace used to extract iron from its ore.

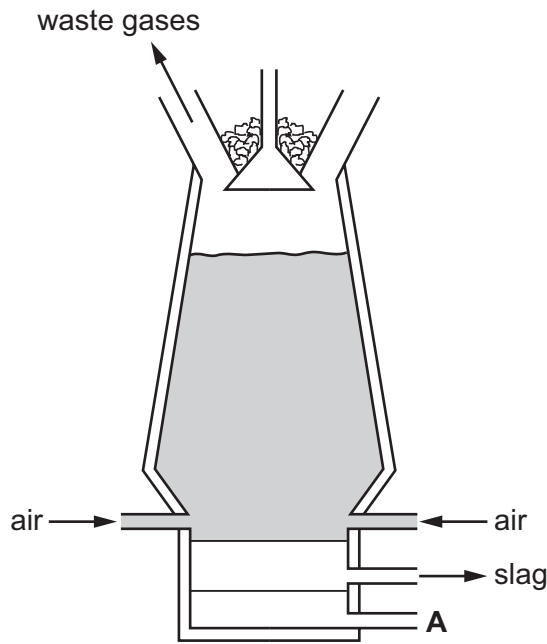


Fig. 6.1

(i) Coke and iron ore are added at the top of the blast furnace.

Name one **other** substance that is added at the top of the blast furnace.

..... [1]

(ii) Name the substance that leaves the blast furnace at **A**.

..... [1]

(iii) Slag is produced from an impurity in iron ore.

Name the impurity in iron ore that is converted into slag.

..... [1]

(iv) Name **two** substances that react together to produce the high temperature in the blast furnace.

..... and ..... [1]

(v) Name **two** waste gases that leave the blast furnace.

1 .....

2 .....

[2]

(b) Zinc is produced from zinc oxide in a furnace.

The zinc is produced as a gas. It then forms molten zinc.

(i) Suggest why the zinc produced inside the furnace is a gas.

..... [1]

(ii) State the name of the physical change that occurs when gaseous zinc is converted into molten zinc.

..... [1]

(c) Zinc is used to coat iron to prevent rusting.

(i) Name the process used to coat iron with zinc as a method of rust prevention.

..... [1]

(ii) When the zinc coating is scratched, the iron underneath does not rust.

Explain why the iron underneath the zinc does **not** rust.

.....  
 ..... [2]

(d) Zinc oxide neutralises both acids and bases.

(i) State the general name given to oxides that neutralise both acids and bases.

..... [1]

(ii) When zinc oxide neutralises aqueous sodium hydroxide, sodium zincate is formed.

The formula of the zincate ion is  $\text{ZnO}_2^{2-}$ .

Deduce the formula of sodium zincate.

..... [1]

(iii) Name the zinc compound that forms when zinc oxide neutralises dilute sulfuric acid.

..... [1]

[Total: 14]

7 Many organic compounds contain carbon and hydrogen only.

(a) (i) Organic compound **A** has the following composition by mass.

C, 82.76%; H, 17.24%

Calculate the empirical formula of compound **A**.

empirical formula = ..... [3]

(ii) Compound **B** has the empirical formula  $\text{CH}_2$  and a relative molecular mass of 70.

Determine the molecular formula of compound **B**.

molecular formula = ..... [1]

(b) Fig. 7.1 shows a section of polymer **Q**.

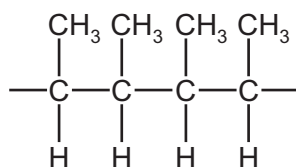


Fig. 7.1

- Draw the displayed formula of the monomer that forms polymer **Q**.

- Name the monomer used to form polymer **Q**.

..... [3]

- (c) Propene,  $C_3H_6$ , can be produced by heating  $C_{11}H_{24}$ . The products of the reaction are propene, hydrogen and one other product in a 1 : 1 : 1 mole ratio.

Complete the symbol equation for this reaction.



- (d) Carboxylic acids and esters contain carbon, hydrogen and oxygen only.

An ester **X** and a carboxylic acid **Y** both contain 3 carbon atoms.

**X** and **Y** have the same molecular formula.

- (i) State the name given to compounds with the same molecular formula but different structural formulae.

..... [1]

- (ii) Esters are made by the reaction between carboxylic acids and alcohols.

Ester **X** is methyl ethanoate.

Name the carboxylic acid and the alcohol used to make methyl ethanoate.

carboxylic acid .....

alcohol .....

[2]

- (iii) Draw the displayed formula of carboxylic acid **Y**. Name the carboxylic acid.

name .....

[2]

[Total: 13]



**BLANK PAGE**

---

Permission to reproduce items where third-party owned material protected by copyright is included has been sought and cleared where possible. Every reasonable effort has been made by the publisher (UCLES) to trace copyright holders, but if any items requiring clearance have unwittingly been included, the publisher will be pleased to make amends at the earliest possible opportunity.

To avoid the issue of disclosure of answer-related information to candidates, all copyright acknowledgements are reproduced online in the Cambridge Assessment International Education Copyright Acknowledgements Booklet. This is produced for each series of examinations and is freely available to download at [www.cambridgeinternational.org](http://www.cambridgeinternational.org) after the live examination series.

Cambridge Assessment International Education is part of Cambridge Assessment. Cambridge Assessment is the brand name of the University of Cambridge Local Examinations Syndicate (UCLES), which is a department of the University of Cambridge.

## The Periodic Table of Elements

		Group																																																	
I	II	III	IV	V	VI	VII	VIII																																												
1	2	3	4	5	6	7	8	9	10	11	12	13	14	15	16	17	18																																		
Li lithium 7	Be beryllium 9	B boron 11	C carbon 12	Al aluminium 13	Si silicon 14	P phosphorus 15	S sulfur 16	Cl chlorine 17	Ar argon 18	K potassium 19	Ca calcium 20	Sc scandium 21	Ti titanium 22	V vanadium 23	Cr chromium 24	Mn manganese 25	Fe iron 26	Co cobalt 27	Ni nickel 28	Cu copper 29	Zn zinc 30	Ga gallium 31	Ge germanium 32	As arsenic 33	Se selenium 34	Br bromine 35	Kr krypton 36																								
37 Rb rubidium 85	Sr strontium 88	Y yttrium 89	Zr zirconium 90	Nb niobium 91	Mo molybdenum 92	Tc technetium 93	Ru ruthenium 94	Rh rhodium 95	Pd palladium 96	Ag silver 97	Cd cadmium 98	In indium 99	Sn tin 100	Sb antimony 101	Te tellurium 102	I iodine 103	Xe xenon 104	Cs caesium 133	Ba barium 137	La lanthanum 139	Ce cerium 140	Pr praseodymium 141	Nd neodymium 142	Pm promethium 143	Sm samarium 150	Eu europium 152	Gd gadolinium 157	Tb terbium 159	Dy dysprosium 163	Ho holmium 165	Er erbium 167	Tm thulium 169	Yb ytterbium 173	Lu lutetium 175	Fr francium 87	Ra radium 88	Ac actinium 89	Th thorium 90	Pa protactinium 91	U uranium 92	Np neptunium 93	Pu plutonium 94	Am americium 95	Cm curium 96	Bk berkelium 97	Cf californium 98	Es einsteinium 99	Fm fermium 100	Md mendelevium 101	No nobelium 102	Lr lawrencium 103
55 Cs caesium 133	56 Ba barium 137	57-71 lanthanoids	72 Hf hafnium 178	73 Ta tantalum 181	74 W tungsten 184	75 Re rhenium 186	76 Os osmium 190	77 Ir iridium 192	78 Pt platinum 195	79 Au gold 197	80 Hg mercury 201	81 Tl thallium 204	82 Pb lead 207	83 Bi bismuth 209	84 Po polonium 209	85 At astatine 209	86 Rn radon 222	87 Fr francium 87	88 Ra radium 88	89-103 actinoids	104 Rf rutherfordium 261	105 Db dubnium 262	106 Sg seaborgium 266	107 Bh bohrium 264	108 Hs hassium 265	109 Mt meitnerium 268	110 Ds darmstadtium 271	111 Rg roentgenium 272	112 Cn copernicium 285	113 Nh nihonium 286	114 Fl flerovium 289	115 Mc moscovium 288	116 Lv livermorium 293	117 Ts tennessine 294	118 Og oganesson 294																

## Key

atomic number  
atomic symbol  
name  
relative atomic mass

1  
H  
hydrogen  
1

lanthanoids

actinoids

The volume of one mole of any gas is 24 dm<sup>3</sup> at room temperature and pressure (r.t.p.).