



Cambridge International Examinations
Cambridge International General Certificate of Secondary Education

CANDIDATE
NAME

CENTRE
NUMBER

--	--	--	--	--

CANDIDATE
NUMBER

--	--	--	--



CHEMISTRY

0620/63

Paper 6 Alternative to Practical

October/November 2018

1 hour

Candidates answer on the Question Paper.

No Additional Materials are required.

READ THESE INSTRUCTIONS FIRST

Write your Centre number, candidate number and name on all the work you hand in.

Write in dark blue or black pen.

You may use an HB pencil for any diagrams or graphs.

Do not use staples, paper clips, glue or correction fluid.

DO **NOT** WRITE IN ANY BARCODES.

Answer **all** questions.

Electronic calculators may be used.

You may lose marks if you do not show your working or if you do not use appropriate units.

At the end of the examination, fasten all your work securely together.

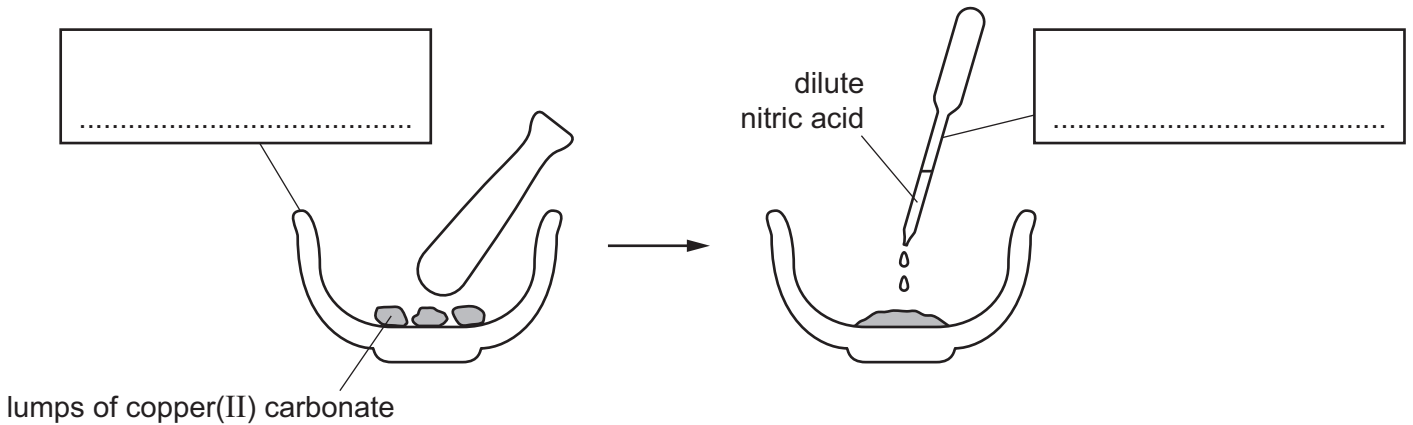
The number of marks is given in brackets [] at the end of each question or part question.

bestexamhelp.com

The syllabus is approved for use in England, Wales and Northern Ireland as a Cambridge International Level 1/Level 2 Certificate.

This document consists of **9** printed pages and **3** blank pages.

- 1 A sample of copper was prepared from lumps of copper(II) carbonate. The first step was to make a solution of copper(II) nitrate as shown. Carbon dioxide was produced.



(a) Complete the boxes to name the apparatus. [2]

(b) Describe a test for carbon dioxide.

test

result

[2]

(c) Explain why the lumps of copper(II) carbonate were crushed before adding the dilute nitric acid.

.....

..... [2]

(d) Suggest how a sample of copper could be obtained from the solution of copper(II) nitrate. Explain your suggestion.

.....

.....

..... [2]

[Total: 8]

- 2 A student investigated the rate of reaction between solution **S** and solution **T** at different temperatures. When these chemicals react they form iodine. Sodium thiosulfate solution and starch solution were used to show how fast the reaction proceeded.

Four experiments were done.

Experiment 1

- A measuring cylinder was used to add 10 cm³ of solution **S** and 10 cm³ of sodium thiosulfate solution to a conical flask.
- A teat pipette was then used to add 1 cm³ of starch solution to the mixture.
- The temperature of the mixture was measured and recorded in the table.
- The reaction was started by using a measuring cylinder to add 10 cm³ of solution **T** to the conical flask. A timer was started immediately and the mixture was swirled.
- The time taken for the mixture to turn blue-black was measured.
- The final temperature of the mixture was measured and recorded.
- The conical flask was emptied and rinsed with distilled water.

Experiment 2

- A measuring cylinder was used to add 10 cm³ of solution **S** and 10 cm³ of sodium thiosulfate solution to the conical flask.
- A teat pipette was then used to add 1 cm³ of starch solution to the mixture.
- The mixture was then heated to about 30 °C.
- The temperature of the mixture was measured and recorded in the table.
- The reaction was started by using a measuring cylinder to add 10 cm³ of solution **T** to the conical flask. The timer was started immediately and the mixture was swirled.
- The time taken for the mixture to turn blue-black was measured.
- The final temperature of the mixture was measured and recorded.
- The conical flask was emptied and rinsed with distilled water.

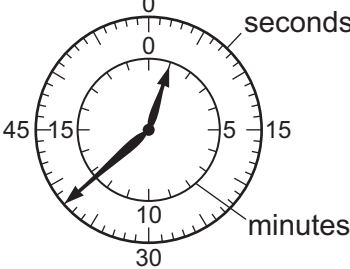
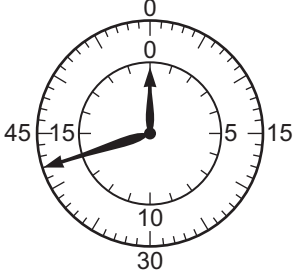
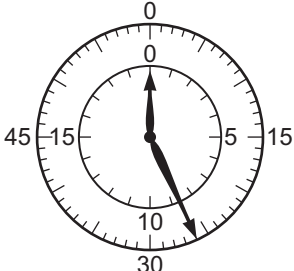

Experiment 3

- Experiment 2 was repeated but the mixture of solution **S**, sodium thiosulfate solution and starch solution in the conical flask was heated to about 40 °C before adding solution **T**.

Experiment 4

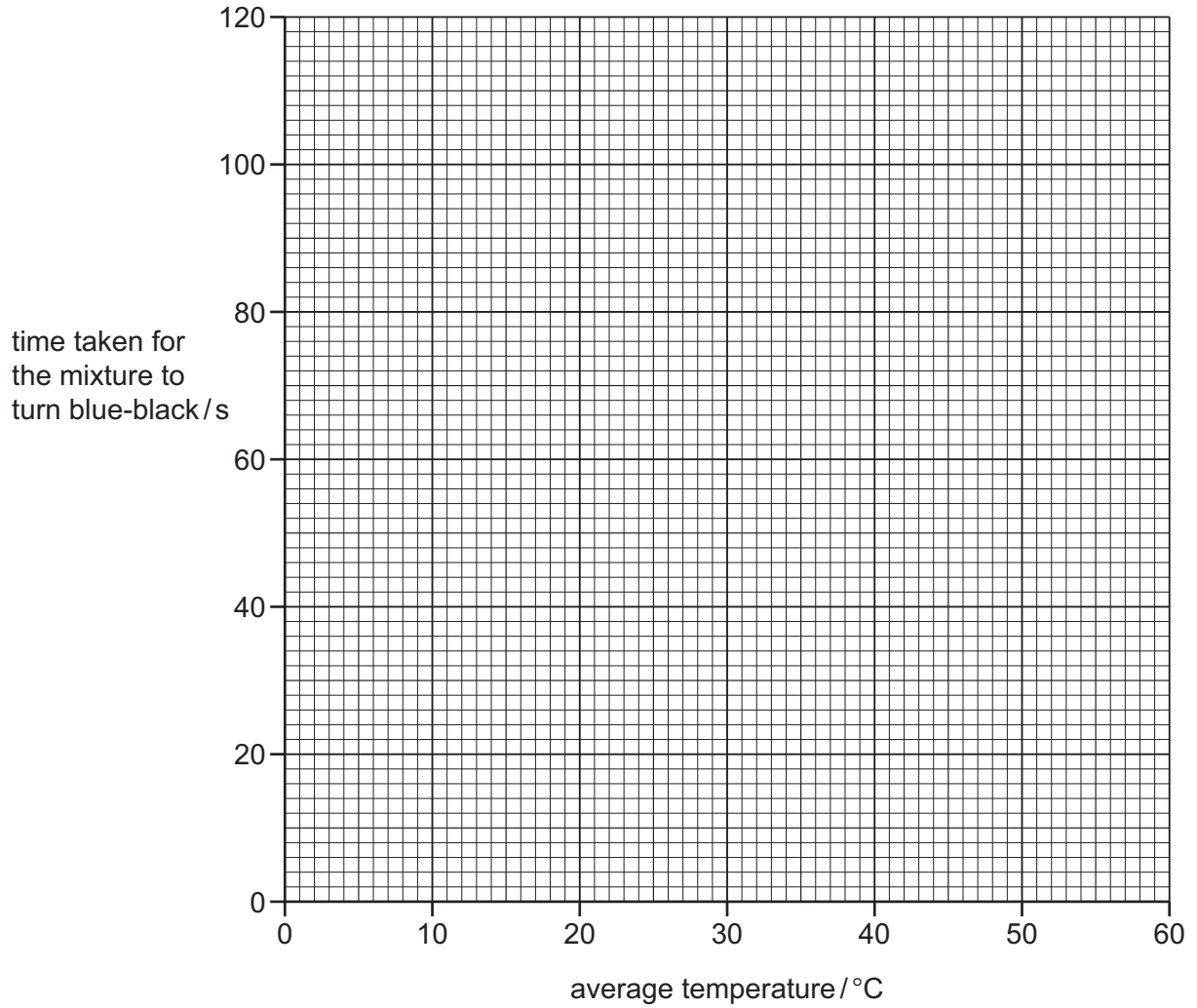
- Experiment 2 was repeated but the mixture of solution **S**, sodium thiosulfate solution and starch solution in the conical flask was heated to about 50 °C before adding solution **T**.

- (a) Calculate the average temperatures in the table.
Use the stop-clock diagrams to record the time taken for each experiment in the table.

experiment number	initial temperature /°C	final temperature /°C	average temperature /°C	stop-clock diagram	time taken for the mixture to turn blue-black/s
1	22	22			
2	31	29			
3	41	37			
4	51	45			

[4]

(b) Plot the results for Experiments 1–4 on the grid. Draw a smooth line graph.



[4]

(c) From your graph, deduce the average temperature needed for the mixture to turn blue-black in 60s.

Show clearly on the grid how you worked out your answer.

..... [3]

(d) (i) In which experiment, 1, 2, 3 or 4, was the rate of reaction greatest?

..... [1]

(ii) Explain, in terms of particles, why the rate of reaction was greatest in this experiment.

.....

 [2]

- (e) Pipettes or burettes could be used to measure the volumes of solution **S** and the sodium thiosulfate solution more accurately.

State and explain **one other** way to improve the accuracy of the results of these experiments.

way to improve the accuracy

explanation

.....

[2]

- (f) A student predicted that using a burette to add solution **T** would improve the accuracy of the results of these experiments.

Suggest why the student's prediction would **not** improve the accuracy of the results of these experiments.

.....

..... [2]

[Total: 18]

3 Solid **P** and solid **Q** were analysed. Solid **P** was lithium nitrate. Tests were done on each solid.

tests on solid P

Complete the expected observations.

(a) Describe the appearance of solid **P**.

..... [1]

Solid **P** was divided into three portions.

(b) Aqueous sodium hydroxide and a small piece of aluminium foil were added to the first portion of solid **P**. The mixture was heated and the gas produced was tested.

observations

.....

..... [3]

(c) The second portion of solid **P** was dissolved in distilled water. Dilute nitric acid and aqueous barium nitrate were then added to the solution.

observations [1]

(d) A flame test was done on the third portion of solid **P**.

observations [1]

tests on solid Q

Some of the tests and observations are shown.

tests on solid Q	observations
The appearance of solid Q was studied.	pink crystals
Solid Q was heated in a hard glass test-tube.	condensation formed at the top of the test-tube
Dilute nitric acid and aqueous silver nitrate were added to an aqueous solution of solid Q.	white precipitate

(e) What conclusions can you draw about the identity of solid Q?

.....
..... [2]

[Total: 8]

- 4 Some cleaning products are mixtures. The three substances present in a cleaning product are listed in the table.

substance	state at room temperature	physical property
sodium carbonate	solid	melts at 858 °C
ethanol	liquid	boils at 78 °C
limonene	liquid	boils at 176 °C

Use the information in the table to plan an experiment to obtain a sample of each substance from a mixture of the three substances.

You are provided with a mixture of the three substances and common laboratory apparatus.

.....

.....

.....

.....

.....

.....

.....

.....

.....

.....

..... [6]

[Total: 6]

BLANK PAGE

Permission to reproduce items where third-party owned material protected by copyright is included has been sought and cleared where possible. Every reasonable effort has been made by the publisher (UCLES) to trace copyright holders, but if any items requiring clearance have unwittingly been included, the publisher will be pleased to make amends at the earliest possible opportunity.

To avoid the issue of disclosure of answer-related information to candidates, all copyright acknowledgements are reproduced online in the Cambridge International Examinations Copyright Acknowledgements Booklet. This is produced for each series of examinations and is freely available to download at www.cie.org.uk after the live examination series.

Cambridge International Examinations is part of the Cambridge Assessment Group. Cambridge Assessment is the brand name of University of Cambridge Local Examinations Syndicate (UCLES), which is itself a department of the University of Cambridge.