



Cambridge International Examinations
Cambridge International General Certificate of Secondary Education

CHEMISTRY

0620/12

Paper 1 Multiple Choice (Core)

February/March 2018

45 minutes

Additional Materials: Multiple Choice Answer Sheet
Soft clean eraser
Soft pencil (type B or HB is recommended)



READ THESE INSTRUCTIONS FIRST

Write in soft pencil.

Do not use staples, paper clips, glue or correction fluid.

Write your name, Centre number and candidate number on the Answer Sheet in the spaces provided unless this has been done for you.

DO NOT WRITE IN ANY BARCODES.

There are **forty** questions on this paper. Answer **all** questions. For each question there are four possible answers **A, B, C** and **D**.

Choose the **one** you consider correct and record your choice in **soft pencil** on the separate Answer Sheet.

Read the instructions on the Answer Sheet very carefully.

Each correct answer will score one mark. A mark will not be deducted for a wrong answer.

Any rough working should be done in this booklet.

A copy of the Periodic Table is printed on page 16.

Electronic calculators may be used.

bestexamhelp.com

The syllabus is approved for use in England, Wales and Northern Ireland as a Cambridge International Level 1/Level 2 Certificate.

This document consists of **13** printed pages and **3** blank pages.

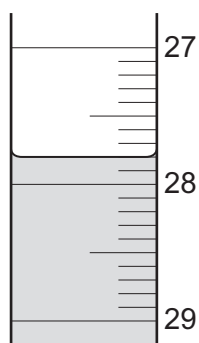
1 Four physical changes are listed.

- 1 condensation
- 2 evaporation
- 3 freezing
- 4 sublimation

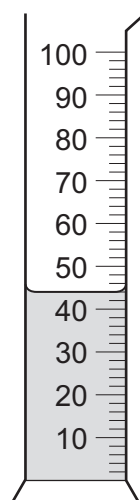
In which changes do the particles move further apart?

- A** 1 and 2 **B** 1 and 3 **C** 2 and 4 **D** 3 and 4

2 The diagram shows liquid in a burette and in a measuring cylinder.



burette



measuring cylinder

Which row shows the readings for the burette and the measuring cylinder?

	burette	measuring cylinder
A	27.8	42
B	27.8	44
C	28.2	42
D	28.2	44

- 3 Substance L melts at -7°C and is a brown liquid at room temperature.

Which temperature is the boiling point of pure L?

- A -77°C
- B -7°C to $+7^{\circ}\text{C}$
- C 59°C
- D 107°C to 117°C

- 4 A student is given a mixture of barium sulfate, copper(II) sulfate and water.

The table shows information about barium sulfate and copper(II) sulfate.

substance	solubility in water	state at room temperature
barium sulfate	insoluble	solid
copper(II) sulfate	soluble	solid

How does the student obtain copper(II) sulfate crystals from the mixture?

- A crystallisation followed by distillation
 - B crystallisation followed by filtration
 - C distillation followed by crystallisation
 - D filtration followed by crystallisation
- 5 What is the nucleon number of an atom?
- A the number of electrons, neutrons and protons in the nucleus
 - B the number of neutrons and protons in the nucleus
 - C the number of neutrons in the nucleus
 - D the number of protons in the nucleus

- 6 Caesium, Cs, is an element in Group I of the Periodic Table.

When caesium reacts it forms a positive ion, Cs^+ .

How is a caesium ion formed?

- A A caesium atom gains a proton.
- B A caesium atom gains an electron.
- C A caesium atom loses an electron.
- D A caesium atom shares an electron.

7 Which statement about graphite and diamond is correct?

- A Diamond has a high melting point but graphite does not.
- B Graphite and diamond both conduct electricity.
- C Graphite and diamond both have giant structures.
- D Graphite is ionic and diamond is covalent.

8 What is the definition of relative atomic mass, A_r ?

- A $\left(\frac{\text{average mass of naturally occurring atoms of an element}}{\text{mass of one atom of } ^{12}\text{C}} \right) \times 12$
- B $\left(\frac{\text{average mass of naturally occurring atoms of an element}}{\text{mass of one atom of } ^{12}\text{C} \times 12} \right)$
- C $\left(\frac{\text{average mass of naturally occurring atoms of an element}}{\text{mass of one atom of } ^{12}\text{C}} \right)$
- D $\left(\frac{\text{mass of one atom of } ^{12}\text{C}}{\text{average mass of naturally occurring atoms of an element}} \right)$

9 Which statement about electrolysis reactions is correct?

- A When concentrated aqueous sodium chloride is electrolysed, sodium forms at the cathode.
- B When concentrated hydrochloric acid is electrolysed, a green gas forms at the cathode.
- C When dilute sulfuric acid is electrolysed, a colourless gas forms at both electrodes.
- D When molten lead(II) bromide is electrolysed, lead forms at the anode.

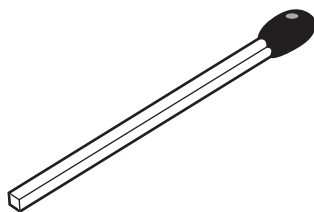
10 Statement 1 Hydrogen is used as a fuel.

Statement 2 When hydrogen burns in the air to form water, heat energy is produced.

Which is correct?

- A Both statements are correct and statement 2 explains statement 1.
- B Both statements are correct but statement 2 does not explain statement 1.
- C Statement 1 is correct but statement 2 is incorrect.
- D Statement 2 is correct but statement 1 is incorrect.

11 The diagram shows a match.



By striking the match, a chemical reaction takes place.

Which row describes the chemical reaction?

	type of reaction	reason
A	endothermic	because energy is given out as the match burns
B	endothermic	because energy is used to strike the match
C	exothermic	because energy is given out as the match burns
D	exothermic	because energy is used to strike the match

12 Magnesium carbonate was reacted with dilute hydrochloric acid in a conical flask.

The conical flask was placed on a balance and the mass of the conical flask and contents was recorded as the reaction proceeded.

During the reaction, carbon dioxide gas was produced.

The reaction was done at two different temperatures.

Which row is correct?

	change in mass	temperature at which the mass changed more quickly
A	decrease	higher temperature
B	decrease	lower temperature
C	increase	higher temperature
D	increase	lower temperature

- 13 Separate samples of anhydrous copper(II) sulfate and hydrated copper(II) sulfate are heated.



Which row shows the correct colour changes?

	anhydrous copper(II) sulfate	hydrated copper(II) sulfate
A	blue to white	white to blue
B	no change	blue to white
C	white to blue	blue to white
D	white to blue	no change

- 14 In which equation does oxidation of the underlined substance occur?

- A** $2\text{CuO} + \text{C} \rightarrow \text{CO}_2 + \underline{2\text{Cu}}$
- B** $\text{Fe}_2\text{O}_3 + \underline{3\text{CO}} \rightarrow 2\text{Fe} + 3\text{CO}_2$
- C** $2\text{Mg} + \text{O}_2 \rightarrow \underline{2\text{MgO}}$
- D** $\underline{\text{MnO}_2} + 4\text{HCl} \rightarrow \text{MnCl}_2 + 2\text{H}_2\text{O} + \text{Cl}_2$

- 15 Which property is shown by the alkali sodium hydroxide?

- A** It has a pH less than pH 7.
- B** It produces a gas when it is warmed with ammonium chloride.
- C** It turns blue litmus red.
- D** It turns Universal Indicator green.

- 16 A solution of compound Z gives a light blue precipitate with aqueous ammonia. The precipitate dissolves in an excess of ammonia.

A flame test is done on compound Z.

What is the colour of the flame?

- A** blue-green
- B** lilac
- C** red
- D** yellow

17 Carbon, copper, magnesium, sodium and sulfur can all form oxides.

How many of these elements form acidic oxides?

- A 1 B 2 C 3 D 4

18 Which method is used to make the salt copper(II) sulfate?

- A dilute acid + alkali
 B dilute acid + carbonate
 C dilute acid + metal
 D dilute acid + non-metal oxide

19 The Periodic Table lists all the known elements.

Elements are arranged in order of 1 number.

The melting points of Group I elements 2 down the group.

The melting points of Group VII elements 3 down the group.

Which words correctly complete gaps 1, 2 and 3?

	1	2	3
A	nucleon	decrease	increase
B	nucleon	increase	decrease
C	proton	decrease	increase
D	proton	increase	decrease

20 Which statements about Group I and Group VII elements are correct?

- 1 In Group I, lithium is more reactive than potassium.
- 2 In Group VII, chlorine is more reactive than fluorine.

	statement 1	statement 2
A	✓	✓
B	✓	x
C	x	✓
D	x	x

- 21 Which statement describes transition elements?
- A** They have high densities and high melting points.
B They have high densities and low melting points.
C They have low densities and high melting points.
D They have low densities and low melting points.
- 22 Which trend occurs across the period from sodium to argon?
- A** a change from metal to non-metal
B an increase in melting point
C a more violent reaction with water
D an increase in electrical conductivity
- 23 Why is argon used in lamps?
- A** Argon forms molecules when electricity is passed through it.
B Argon is inert and so does not react with the hot filament.
C Argon is less dense than air.
D Argon produces light when it burns.

- 24 Metals W, X, Y and Z are reacted with dilute hydrochloric acid.

The oxides of metals W, X, Y and Z are heated with carbon.

The results are shown.

reaction	W	X	Y	Z
metal + dilute hydrochloric acid	fizzing	fizzing	violent fizzing	no reaction
metal oxide + carbon + heat	no reaction	metal produced	no reaction	metal produced

What is the order of reactivity of the metals?

	most reactive	→			least reactive
A	Y	W	X	Z	
B	Y	X	W	Z	
C	Z	W	X	Y	
D	Z	X	W	Y	

25 Iron is extracted from Fe_2O_3 by reduction with carbon.

Aluminium is difficult to extract from Al_2O_3 . The process requires electrolysis.

Starting with the most reactive, which order of reactivity is correct?

- A $\text{Al} \rightarrow \text{C} \rightarrow \text{Fe}$
- B $\text{Al} \rightarrow \text{Fe} \rightarrow \text{C}$
- C $\text{Fe} \rightarrow \text{Al} \rightarrow \text{C}$
- D $\text{Fe} \rightarrow \text{C} \rightarrow \text{Al}$

26 Which two properties are physical properties of **all** pure metals?

	property 1	property 2
A	brittle	poor conductor of heat
B	good conductor of electricity	malleable
C	good conductor of heat	low melting point
D	malleable	low density

27 Which statement about the uses of aluminium, copper and iron is correct?

- A Aluminium is used for aircraft manufacture because it has a high density.
- B Aluminium is used for food containers because it is a good conductor of electricity.
- C Copper is used for cooking utensils because it is a good conductor of heat.
- D Stainless steel is used for car bodies because it corrodes easily.

28 The list gives four experiments done with calcium carbonate.

- 1 acid added
- 2 alkali added
- 3 heated strongly
- 4 water added

Which experiments produced carbon dioxide?

- A 1 and 2
- B 1 and 3
- C 2 and 3
- D 2 and 4

29 Water must be purified before it is suitable for use in the home.

Which processes are used to remove solid impurities and to kill bacteria?

	to remove solid impurities	to kill bacteria
A	chlorination	chlorination
B	chlorination	filtration
C	filtration	chlorination
D	filtration	filtration

30 Which gas is **not** present in clean air?

- A** argon
- B** carbon dioxide
- C** carbon monoxide
- D** water vapour

31 Which pair of compounds would make an NPK fertiliser?

- A** ammonium sulfate and potassium phosphate
- B** calcium hydroxide and ammonium nitrate
- C** calcium phosphate and potassium chloride
- D** potassium nitrate and ammonium sulfate

32 Which pollutant gas is produced by the decomposition of vegetation?

- A** carbon monoxide
- B** methane
- C** nitrogen dioxide
- D** sulfur dioxide

33 Sulfur burns to make sulfur dioxide.

Which row describes a source of sulfur and a use of sulfur dioxide?

	source of sulfur	use of sulfur dioxide
A	the air	food preservative
B	the air	water treatment
C	underground deposits	food preservative
D	underground deposits	water treatment

34 The diagram shows the pH values of the soil in two parts of a garden, X and Y.

X pH 7.0	Y pH 5.5
-------------	-------------

Lime is used to neutralise the soil in one part of the garden.

To which part of the garden should the lime be added and why?

	part of the garden	because lime is
A	X	acidic
B	X	basic
C	Y	acidic
D	Y	basic

35 Which substance is **not** used as a fuel?

- A** ethanol
- B** hydrogen
- C** methane
- D** oxygen

36 Which formula represents an alkene?

- A** CH₄
- B** C₂H₄
- C** C₂H₆
- D** C₂H₅OH

37 Three chemical reactions are shown.

- 1 catalytic addition of steam to ethene
- 2 combustion of ethanol
- 3 fermentation of glucose

In which of the reactions does the relative molecular mass of the carbon-containing compound decrease?

- A** 1 and 2 **B** 1 only **C** 2 and 3 **D** 3 only

38 How is ethanol produced by fermentation?

- A** using anaerobic conditions at 30 °C
B using anaerobic conditions at 450 °C
C using steam at 30 °C
D using steam at 450 °C

39 A compound has the formula CH_3COOH .

What is **not** a property of this compound?

- A** It has a smell like vinegar.
B It reacts with acids to form salts.
C It reacts with magnesium to produce hydrogen.
D It turns blue litmus red.

40 Which statement about polymers is correct?

- A** Polymers are formed by breaking down monomers.
B Polymers can be natural or synthetic.
C Polymers contain atoms of only one element.
D Polymers have a giant ionic structure.

BLANK PAGE

BLANK PAGE

Permission to reproduce items where third-party owned material protected by copyright is included has been sought and cleared where possible. Every reasonable effort has been made by the publisher (UCLES) to trace copyright holders, but if any items requiring clearance have unwittingly been included, the publisher will be pleased to make amends at the earliest possible opportunity.

To avoid the issue of disclosure of answer-related information to candidates, all copyright acknowledgements are reproduced online in the Cambridge International Examinations Copyright Acknowledgements Booklet. This is produced for each series of examinations and is freely available to download at www.cie.org.uk after the live examination series.

Cambridge International Examinations is part of the Cambridge Assessment Group. Cambridge Assessment is the brand name of University of Cambridge Local Examinations Syndicate (UCLES), which is itself a department of the University of Cambridge.

The Periodic Table of Elements

		Group																	
I	II	III	IV	V	VI	VII	VIII												
1	2	3	4	5	6	7	8	9	10			11	12						
Li lithium 7	Be beryllium 9	B boron 11	C carbon 12	N nitrogen 14	O oxygen 16	F fluorine 19	Ne neon 20							He helium 4					
11	12	13	14	15	16	17	18												
Na sodium 23	Mg magnesium 24	Al aluminium 27	Si silicon 28	P phosphorus 31	S sulfur 32	Cl chlorine 35.5	Ar argon 40												
19	20	21	22	23	24	25	26	27	28	29	30	31	32	33	34	35	36		
K potassium 39	Ca calcium 40	Sc scandium 45	Ti titanium 48	V vanadium 51	Cr chromium 52	Mn manganese 55	Fe iron 56	Co cobalt 59	Ni nickel 59	Cu copper 64	Zn zinc 65	Ga gallium 70	Ge germanium 73	As arsenic 75	Se selenium 79	Br bromine 80	Kr krypton 84		
37	38	39	40	41	42	43	44	45	46	47	48	49	50	51	52	53	54		
Rb rubidium 85	Sr strontium 88	Y yttrium 89	Zr zirconium 91	Nb niobium 93	Mo molybdenum 96	Tc technetium —	Ru ruthenium 101	Rh rhodium 103	Pd palladium 106	Ag silver 108	Cd cadmium 112	In indium 115	Sn tin 119	Sb antimony 122	Te tellurium 128	I iodine 127	Xe xenon 131		
55	56	57-71	72	73	74	75	76	77	78	79	80	81	82	83	84	85	86		
Cs caesium 133	Ba barium 137	lanthanoids	Hf hafnium 178	Ta tantalum 181	W tungsten 184	Re rhenium 186	Os osmium 190	Ir iridium 192	Pt platinum 195	Au gold 197	Hg mercury 201	Tl thallium 204	Pb lead 207	Bi bismuth 209	Po polonium —	At astatine —	Rn radon —		
87	88	89-103	104	105	106	107	108	109	110	111	112	113	114	115	116	117	118		
Fr francium —	Ra radium —	actinoids	Rf rutherfordium —	Db dubnium —	Sg seaborgium —	Bh bohrium —	Hs hassium —	Mt meitnerium —	Ds darmstadtium —	Rg roentgenium —	Cn copernicium —	Fl flerovium —	Lv livermorium —	Og oganeson —	—	—	—		

Key

atomic number
atomic symbol
name
relative atomic mass

1
H
hydrogen
1

lanthanoids	57 La lanthanum 139	58 Ce cerium 140	59 Pr praseodymium 141	60 Nd neodymium 144	61 Pm promethium —	62 Sm samarium 150	63 Eu europium 152	64 Gd gadolinium 157	65 Tb terbium 159	66 Dy dysprosium 163	67 Ho holmium 165	68 Er erbium 167	69 Tm thulium 169	70 Yb ytterbium 173	71 Lu lutetium 175
actinoids	89 Ac actinium —	90 Th thorium 232	91 Pa protactinium 231	92 U uranium 238	93 Np neptunium —	94 Pu plutonium —	95 Am americium —	96 Cm curium —	97 Bk berkelium —	98 Cf californium —	99 Es einsteinium —	100 Fm fermium —	101 Md mendelevium —	102 No nobelium —	103 Lr lawrencium —

The volume of one mole of any gas is 24 dm³ at room temperature and pressure (r.t.p.).