



Cambridge O Level

CANDIDATE
NAME

--

CENTRE
NUMBER

--	--	--	--	--

CANDIDATE
NUMBER

--	--	--	--



PHYSICS

5054/21

Paper 2 Theory

October/November 2023

1 hour 45 minutes

You must answer on the question paper.

No additional materials are needed.

INSTRUCTIONS

- Answer **all** questions.
- Use a black or dark blue pen. You may use an HB pencil for any diagrams or graphs.
- Write your name, centre number and candidate number in the boxes at the top of the page.
- Write your answer to each question in the space provided.
- Do **not** use an erasable pen or correction fluid.
- Do **not** write on any bar codes.
- You may use a calculator.
- You should show all your working and use appropriate units.
- Take the weight of 1.0 kg to be 9.8 N (acceleration of free fall = 9.8 m/s^2).

INFORMATION

- The total mark for this paper is 80.
- The number of marks for each question or part question is shown in brackets [].

This document has **16** pages. Any blank pages are indicated.

1 Fig. 1.1 shows a toy water rocket.

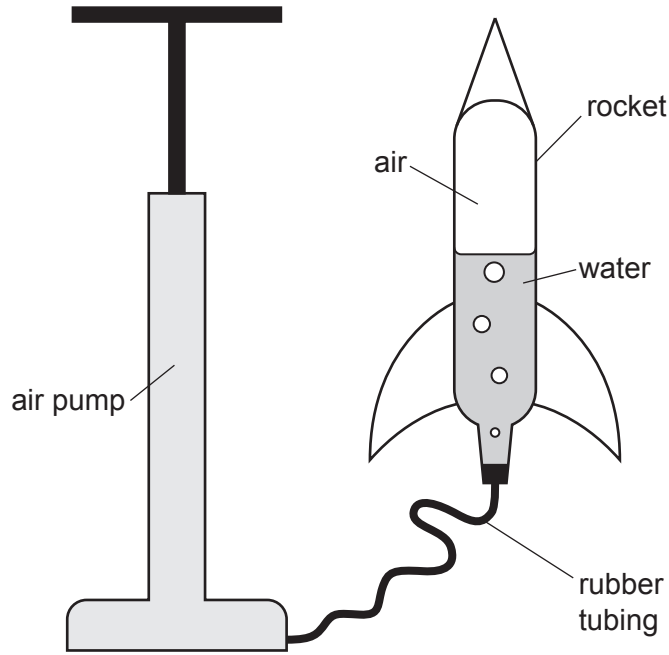


Fig. 1.1

The rocket is half-filled with water and connected by rubber tubing to a pump.

- (a) Air is then pumped into the rocket so that the pressure of the air inside the rocket increases.
 - (i) Explain, in terms of particles, why the air in the rocket exerts a pressure on the walls of the rocket.

.....
.....
.....
..... [3]

- (ii) The temperature of the air in the rocket remains constant as air is pumped into the rocket.

Explain why increasing the number of air particles in the rocket increases the pressure of the air in the rocket.

.....
..... [1]

(b) When the air pressure in the rocket is high, the rubber tubing is removed from the rocket.

The water in the rocket is expelled downwards.

Explain, in terms of momentum, why the rocket begins to accelerate upwards.

.....
.....
.....
..... [3]

(c) As the water is expelled from the rocket, the upward acceleration of the rocket changes.

Suggest **two** reasons for the change in the acceleration of the rocket.

1
.....
2
..... [2]

[Total: 9]

2 A lorry (truck) is at rest on a straight, horizontal road.

A constant driving force of $5.4 \times 10^4 \text{ N}$ acts on the lorry and it accelerates forwards.

(a) Define what is meant by 'acceleration'.

.....
.....
..... [2]

(b) As the lorry moves forwards, work is done on it by the driving force.

(i) State the equation that defines work done.

Refer to the direction of the force exerted.

.....
..... [1]

(ii) Calculate the work done on the lorry by the driving force when the lorry travels a distance of 280 m.

work done = J [2]

(iii) At one point on the road, the kinetic energy of the lorry is $3.2 \times 10^6 \text{ J}$ and its speed is 12 m/s.

Calculate the mass of the lorry.

mass = kg [3]

[Total: 8]

3 When the temperature of a liquid increases, the kinetic energy of its particles increases and the liquid expands.

(a) Explain, by referring to particles, why a liquid expands when heated.

.....
.....
.....
..... [2]

(b) The heater in a kettle is near to the base of the kettle. The kettle is filled with water at a temperature of 17 °C and the heater is switched on.

(i) State the name of the method of thermal energy transfer that causes energy to be transferred to the water that is touching the heater.

..... [1]

(ii) Explain how thermal energy is transferred through all of the water in the kettle.

.....
.....
.....
..... [3]

(iii) State the boiling temperature of water at standard atmospheric pressure. Include the unit in your answer.

..... [1]

(iv) The kettle contains 2.5 kg of water at standard atmospheric pressure.

The specific heat capacity of water is 4200 J/(kg °C).

When the water reaches its boiling temperature, the kettle switches off.

Calculate the increase in the internal energy of the water.

increase in internal energy = J [3]

[Total: 10]

4 Red light of frequency 4.7×10^{14} Hz travels in air at a speed of 3.0×10^8 m/s.

(a) Calculate the wavelength in air of this red light.

wavelength = m [3]

(b) Fig. 4.1 shows a narrow beam of this red light striking the surface of a parallel-sided glass block.

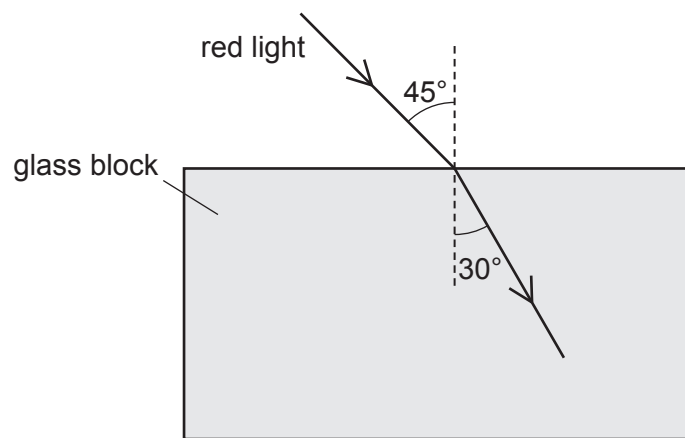


Fig. 4.1

(i) State what happens to the speed, to the frequency and to the wavelength of the light as it enters the block.

speed

frequency

wavelength

[2]

(ii) Using the angles shown on Fig. 4.1, calculate the refractive index of the glass.

refractive index = [3]

- (iii) The light continues along the path shown in Fig. 4.1 until it strikes the bottom surface of the block. Light then emerges into the air.

Draw on Fig. 4.1 to show the path taken by the light until it strikes the bottom surface and the path of the light that emerges into the air. [2]

[Total: 10]

5 Most of the energy emitted by the Sun is in three regions of the electromagnetic spectrum.

(a) The name of one of these three regions is the ultraviolet region.

(i) State the names of all three regions in order of increasing frequency.

smallest frequency

intermediate frequency

largest frequency

[2]

(ii) Some of the ultraviolet radiation emitted by the Sun reaches the surface of the Earth.

Give one possible damaging effect of ultraviolet radiation on the human body and the property of ultraviolet radiation that causes this damage.

damaging effect

.....

property

.....

[2]

(b) Electromagnetic radiation is a transverse wave.

Describe the difference between a transverse wave and a longitudinal wave.

.....

.....

..... [2]

[Total: 6]

- 6 Fig. 6.1 shows a circuit that contains two identical cells, each of e.m.f. 1.5V, that are connected in parallel.

The circuit also contains two ammeters, a thermistor T and two resistors R and S.

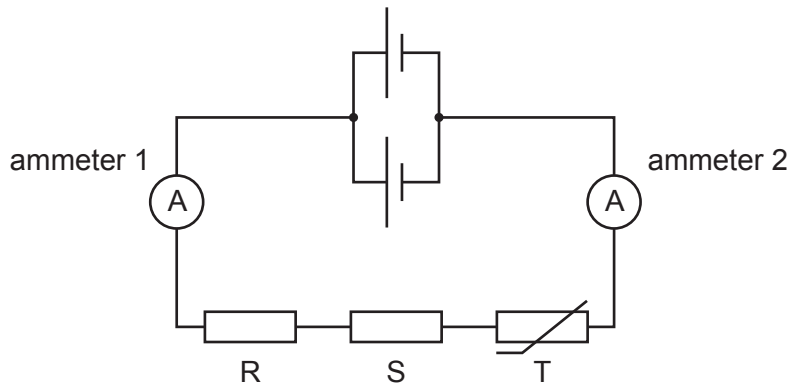


Fig. 6.1

The reading on ammeter 1 is 0.20A.

- (a) State why the reading on ammeter 2 is also 0.20A.

.....
 [1]

- (b) The resistance of R is 1.5Ω and the resistance of S is 3.5Ω .

- (i) Calculate the resistance of T.

resistance = Ω [3]

- (ii) The temperature of T increases.

Explain why the potential difference (p.d.) across T decreases.

.....

 [3]

[Total: 7]

7 An alternating current (a.c.) generator is used in a remote location to supply electricity.

(a) Fig. 7.1 shows the structure of a simple a.c. generator with the coil horizontal.

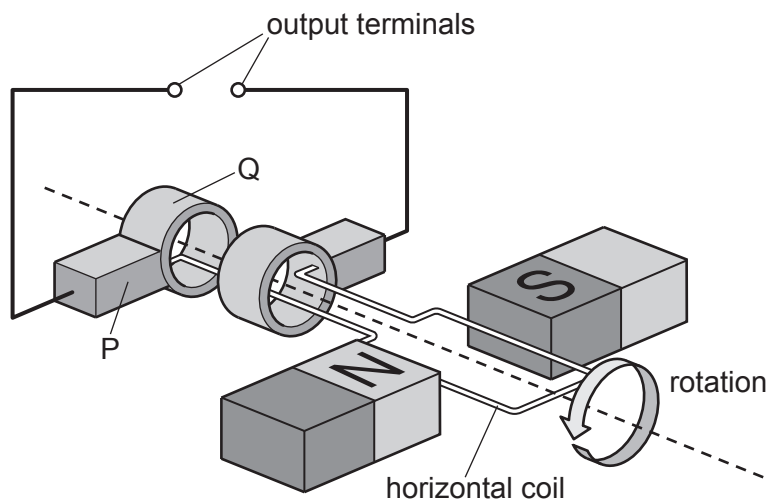


Fig. 7.1

(i) State the name of the components labelled P and Q on Fig. 7.1.

P

Q

[1]

(ii) When the generator is producing an electrical output, P is stationary and Q is rotating.

Explain the purpose of P and Q.

.....

 [2]

(b) The output of the generator is connected to an oscilloscope.

On the oscilloscope the Y-gain is set at 5.0V/cm and the timebase setting is 2.0ms/cm.

Fig. 7.2 shows the trace on the screen of the oscilloscope.

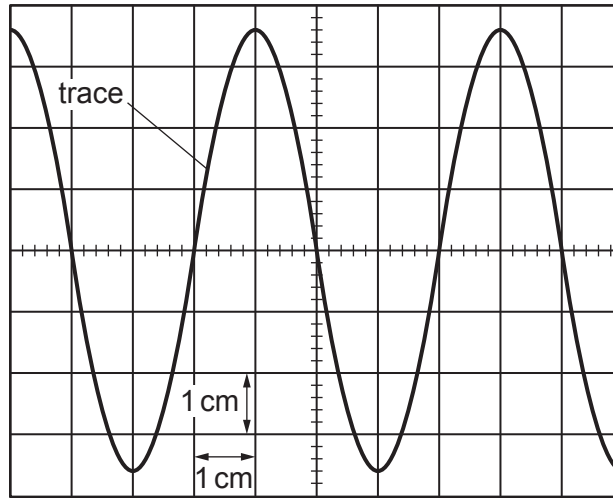


Fig. 7.2

(i) Write a letter X on the trace shown in Fig. 7.2 to indicate one point when the coil is vertical. [1]

(ii) Using Fig. 7.2, determine the maximum value of the e.m.f. produced by the generator.

maximum e.m.f. = V [2]

(iii) Using Fig. 7.2, determine, in milliseconds, the time it takes for one revolution of the coil.

time for one revolution of the coil = ms [1]

(iv) Determine the frequency of the output of the generator.

frequency = Hz [2]

[Total: 9]

8 Uranium-235 ($^{235}_{92}\text{U}$) is the isotope of uranium that is used as the fuel in a nuclear power station.

(a) The isotope of uranium that is most abundant in nature is uranium-238 ($^{238}_{92}\text{U}$).

State how a neutral atom of uranium-235 differs from a neutral atom of uranium-238.

.....
..... [1]

(b) In the reactor of a nuclear power station, a nucleus of uranium-235 absorbs a slow-moving neutron and undergoes fission.

(i) State what happens to the nucleus of an atom during fission.

.....
..... [1]

(ii) Explain how fission can lead to a chain reaction in the reactor.

.....
.....
.....
.....
.....
.....
.....
.....
.....
.....
..... [4]

(iii) State the purpose of the moderator in the reactor.

.....
..... [1]

(iv) Explain the action of the control rods in the reactor.

.....
.....
..... [2]

[Total: 9]

BLANK PAGE

9 The planet Venus orbits the Sun at a constant speed of 3.5×10^4 m/s and takes a time T_V to complete one orbit.

(a) Venus is always 1.1×10^{11} m from the Sun.

Calculate T_V .

$T_V = \dots\dots\dots$ s [2]

(b) Explain why speed is a scalar quantity.

.....
 [1]

(c) Velocity is a vector quantity.

(i) Explain what happens to the velocity of Venus as it orbits the Sun.

.....

 [2]

(ii) There is a resultant force on Venus as it orbits the Sun. The force is perpendicular to the direction of the motion of Venus.

State why this force is needed.

.....
 [1]

(iii) Fig. 9.1 shows the orbit of Venus around the Sun.

On Fig. 9.1, draw an arrow to show the resultant force on Venus.

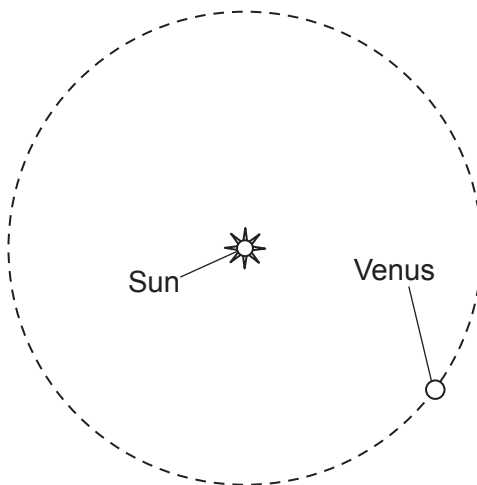


Fig. 9.1

[1]

(iv) State what causes the force acting on Venus.

.....

 [2]

(d) One planet in the Solar System is closer to the Sun than Venus.

(i) State the name of this planet.

..... [1]

(ii) Compare the time that this planet takes to complete one orbit of the Sun with T_V and explain the difference.

.....

 [2]

[Total: 12]

BLANK PAGE

Permission to reproduce items where third-party owned material protected by copyright is included has been sought and cleared where possible. Every reasonable effort has been made by the publisher (UCLES) to trace copyright holders, but if any items requiring clearance have unwittingly been included, the publisher will be pleased to make amends at the earliest possible opportunity.

To avoid the issue of disclosure of answer-related information to candidates, all copyright acknowledgements are reproduced online in the Cambridge Assessment International Education Copyright Acknowledgements Booklet. This is produced for each series of examinations and is freely available to download at www.cambridgeinternational.org after the live examination series.

Cambridge Assessment International Education is part of Cambridge Assessment. Cambridge Assessment is the brand name of the University of Cambridge Local Examinations Syndicate (UCLES), which is a department of the University of Cambridge.