

CANDIDATE
NAME

CENTRE
NUMBER

--	--	--	--	--

CANDIDATE
NUMBER

--	--	--	--



CHEMISTRY

0620/31

Paper 3 Theory (Core)

October/November 2016

1 hour 15 minutes

Candidates answer on the Question Paper.

No Additional Materials are required.

READ THESE INSTRUCTIONS FIRST

Write your Centre number, candidate number and name on all the work you hand in.

Write in dark blue or black pen.

You may use an HB pencil for any diagrams or graphs.

Do not use staples, paper clips, glue or correction fluid.

DO NOT WRITE IN ANY BARCODES.

Answer **all** questions.

Electronic calculators may be used.

A copy of the Periodic Table is printed on page 16.

You may lose marks if you do not show your working or if you do not use appropriate units.

At the end of the examination, fasten all your work securely together.

The number of marks is given in brackets [] at the end of each question or part question.

(b) Mercury has several naturally-occurring isotopes. One of these is shown.



(i) What is the meaning of the term *isotope*?

.....
..... [2]

(ii) How many neutrons are there in **one** atom of the isotope ${}_{80}^{204}\text{Hg}$?

..... [1]

(iii) How many protons are there in **one** atom of the isotope ${}_{80}^{204}\text{Hg}$?

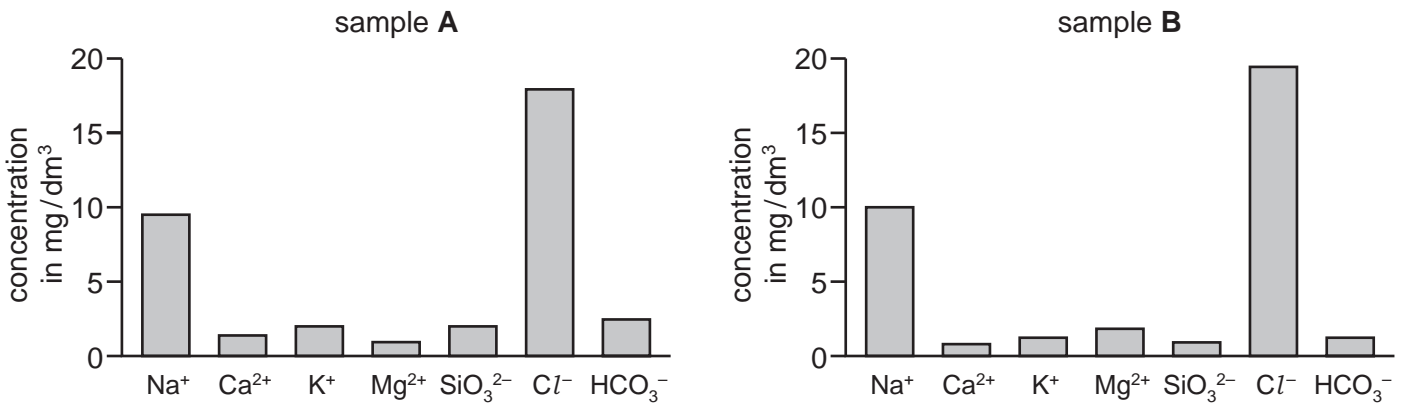
..... [1]

(iv) Determine the number of electrons in the mercury(II) ion, Hg^{2+} .

..... [1]

[Total: 10]

2 The bar charts compare the concentrations of the main ions in two samples of seawater, sample A and sample B.



(a) Use the information in the bar charts to answer the following questions.

(i) Describe **two** differences in the composition of the seawater in sample A and sample B.

.....

 [2]

(ii) Which positive ion has the lowest concentration in sample A?

..... [1]

(iii) Calculate the mass of sodium ions in 200 cm³ of sample B.
 Show all your working. [1 dm³ = 1000 cm³]

mass = mg [2]

(b) Describe a test for sodium ions.

test

result

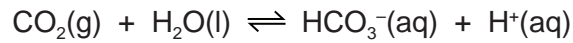
[2]

- (c) River water contains small particles of clay. When these particles are viewed under a microscope they show a random, jumpy motion even when the water is still.

What name is given to this type of movement?

..... [1]

- (d) Carbon dioxide dissolves in water to form a mixture which contains hydrogencarbonate ions and hydrogen ions.



- (i) What is the meaning of the symbol \rightleftharpoons ?

..... [1]

- (ii) The solution formed is slightly acidic.

Describe how you would use Universal Indicator paper to determine the pH of this solution.

.....
 [2]

- (iii) Carbon dioxide is a greenhouse gas which causes climate change.

Explain how carbon dioxide contributes to climate change.

..... [1]

- (iv) State the name of **one** other greenhouse gas and give **one** source of this gas.

gas

source

[2]

[Total: 14]

3 Calcium is in Group II of the Periodic Table.

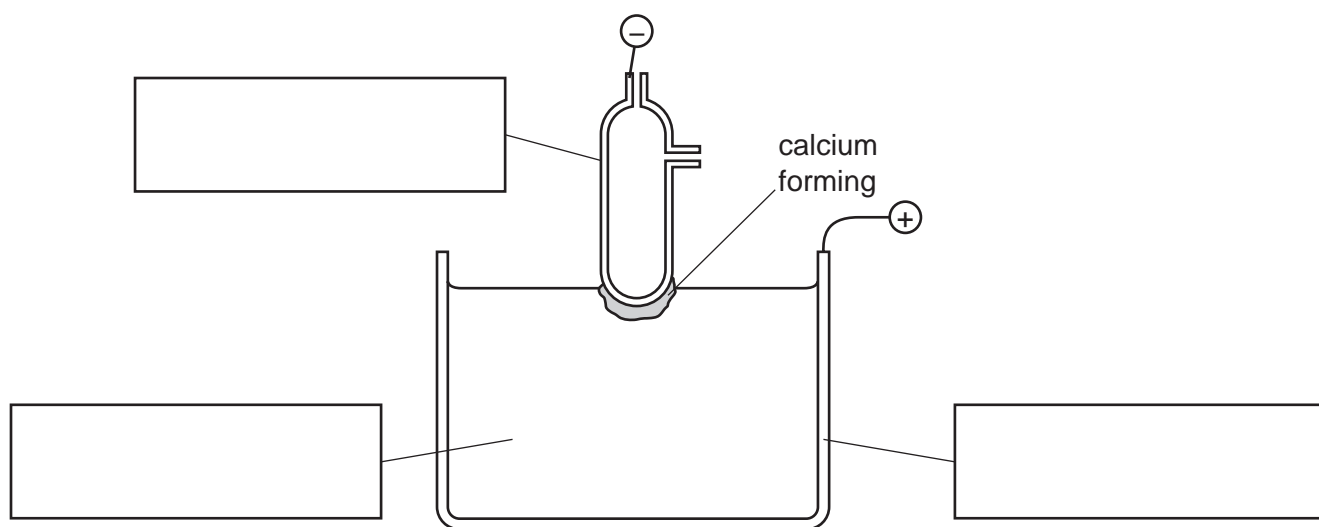
(a) Draw a diagram to show the electronic structure of an atom of calcium.

[2]

(b) Calcium is manufactured by the electrolysis of molten calcium chloride.

Complete the boxes in the diagram to show the

- anode,
- cathode,
- electrolyte.



[2]

(c) Calcium reacts with water to form calcium hydroxide and a gas which 'pops' with a lighted splint.

Complete the chemical equation for this reaction.



[2]

(d) Describe the manufacture and uses of lime (calcium oxide).
Include at least **one** relevant word equation relating to the manufacture or use of lime.

.....

.....

.....

.....

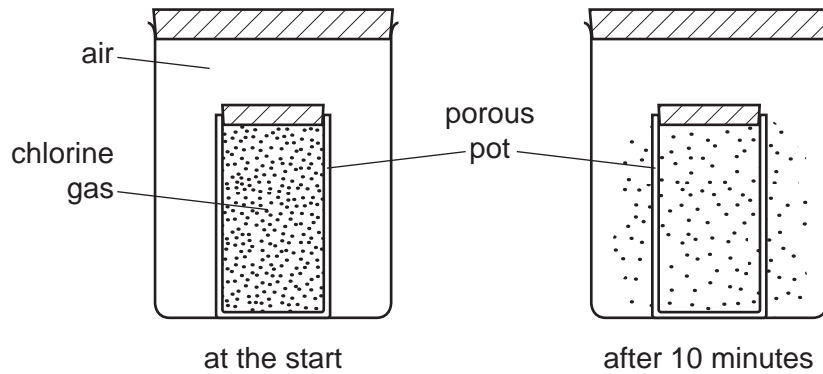
.....

.....

..... [4]

[Total: 10]

- 4 A porous pot has tiny holes in its walls which allow gases to move in or out of the pot. A teacher filled a porous pot with green chlorine gas. The teacher then placed the pot in a large jar of air. After 10 minutes, a green colour was seen outside the porous pot.



- (a) Use the kinetic particle model of matter to explain this observation.

.....

.....

.....

.....

..... [3]

- (b) A porous barrier can be used to separate uranium fluoride molecules containing different isotopes of uranium.

- (i) State the main use of the radioactive isotope ^{235}U .

..... [1]

- (ii) Give **one** medical use of radioactive isotopes.

..... [1]

- (iii) The accurate relative atomic mass of uranium is 238.03.

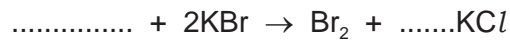
Define the term *relative atomic mass*.

.....

..... [2]

(c) Chlorine reacts with potassium bromide to form bromine and potassium chloride.

(i) Complete the chemical equation for this reaction.



[2]

(ii) Give **one** use of chlorine.

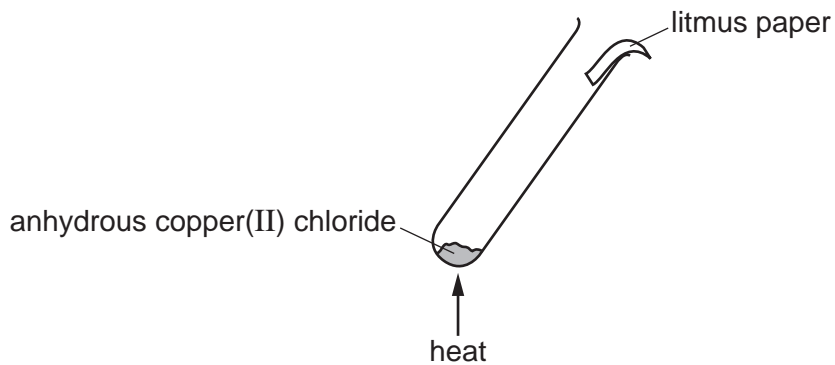
..... [1]

(iii) Chlorine forms an oxide with the formula Cl_2O_7 .

Is this oxide an acidic or a basic oxide?
Explain your answer.

.....
..... [1]

(iv) A teacher heated a test-tube containing anhydrous copper(II) chloride. A piece of damp litmus paper was placed at the top of the test-tube.



The anhydrous copper(II) chloride decomposed and chlorine was formed.

Describe the colour change of the litmus paper.

..... [1]

[Total: 12]

5 The table shows the properties of some steels.

steel	percentage of carbon in the steel	relative strength	melting point range/°C	ease of corrosion
A	1.0	8.0	1430–1460	corrodes easily
B	0.50	6.5	1430–1450	corrodes fairly easily
C	0.25	5.0	1410–1430	corrodes fairly easily
D	0.10	4.0	1440–1450	resistant to corrosion

(a) Use the information in the table to answer the following questions.

(i) What is the relationship between the percentage of carbon in the steel and its strength?

..... [1]

(ii) State whether there is a relationship between the percentage of carbon in the steel and its melting point range.
Explain your answer.

.....
..... [1]

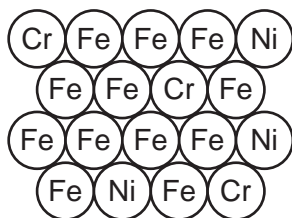
(iii) Which steel would be best to use for making a bicycle chain?
Explain your answer.

.....
..... [1]

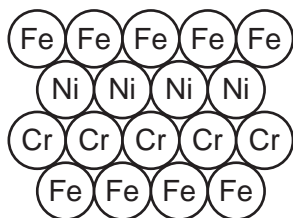
(b) Steel is an alloy.

Which **one** of the diagrams best represents an alloy?

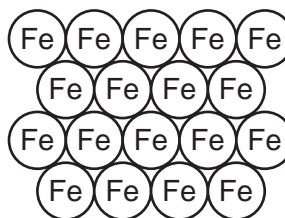
Draw a ring around the correct answer.




A



B



C



D

[1]

(c) High voltage electricity cables are made from aluminium with a steel core.

(i) Apart from conducting electricity, what is the purpose of the steel core?

..... [1]

(ii) Aluminium is a good electrical conductor.

Give **one** other use of aluminium and state a property of aluminium which makes it suitable for this use.

use

property

[2]

(d) Aluminium powder reacts with powdered iron(III) oxide. The equation for this reaction is shown.

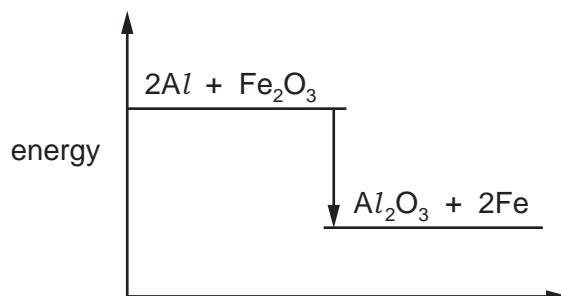


(i) Which substance is oxidised in this reaction?
Explain your answer.

.....

..... [2]

(ii) The energy level diagram for this reaction is shown.



Is this reaction exothermic or endothermic?
Explain your answer.

.....

..... [1]

[Total: 10]

- 6 (a) Describe the characteristic properties of acids.
In your answer you should refer to the reactions of acids with metals, bases, carbonates and indicators.

.....

.....

.....

.....

.....

.....

.....

.....

..... [5]

- (b) The table shows some properties of the first five members of the carboxylic acid homologous series.

acid	molecular formula	melting point /°C	boiling point /°C	density in g/cm ³
methanoic acid	CH ₂ O ₂	8	101	1.22
ethanoic acid	C ₂ H ₄ O ₂	17	118	1.05
propanoic acid	C ₃ H ₆ O ₂	-21	141	0.99
butanoic acid	C ₄ H ₈ O ₂	-5	164	0.96
pentanoic acid	C ₅ H ₁₀ O ₂	-34		0.93

- (i) How does the density of the carboxylic acids vary with the number of carbon atoms in the molecule?

..... [1]

- (ii) Suggest a value for the boiling point of pentanoic acid.

..... [1]

- (iii) Determine the state of ethanoic acid at 15 °C.
Explain your answer.

.....

..... [2]

- (iv) Draw the structure of the functional group present in carboxylic acids.
Show all of the atoms and all of the bonds.

[1]

- (v) Calculate the relative molecular mass of butanoic acid.
Show all your working.

[2]

- (c) Identify the following as either physical changes or chemical changes by writing either 'physical' or 'chemical' in the spaces provided.

The condensation of ethanoic acid vapour to liquid ethanoic acid is a change.

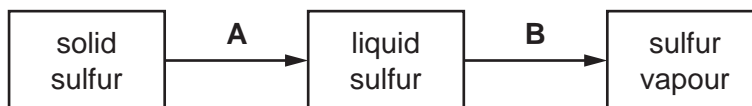
The reaction of sodium with ethanoic acid is a change.

The dissolving of a salt in water is a change.

[2]

[Total: 14]

7 The diagram shows the changes of state when sulfur is heated.



(a) Give the names of the changes of state labelled **A** and **B**.

A

B

[2]

(b) Describe the arrangement and motion of the particles in sulfur vapour.

arrangement

motion

[2]

(c) Give **one** use of sulfur.

..... [1]

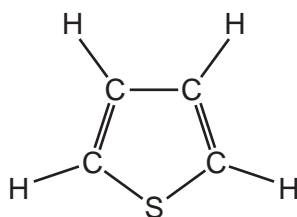
(d) Some compounds of sulfur are found in coal.

Explain why the presence of sulfur in coal has an adverse effect on human health when the coal is burnt.

.....

..... [2]

- (e) One of the compounds of sulfur in coal is thiophene.
The structure of thiophene is shown.



- (i) Determine the formula of thiophene.

..... [1]

- (ii) Thiophene can be made in the laboratory by heating ethyne, C_2H_2 , with hydrogen sulfide, H_2S , in the presence of a catalyst.

What is the purpose of the catalyst?

..... [1]

- (iii) When 2.6 g of ethyne react with excess hydrogen sulfide, 4.2 g of thiophene are formed.

Calculate the mass of thiophene formed when 15.6 g of ethyne react with excess hydrogen sulfide.

[1]

[Total: 10]

Permission to reproduce items where third-party owned material protected by copyright is included has been sought and cleared where possible. Every reasonable effort has been made by the publisher (UCLES) to trace copyright holders, but if any items requiring clearance have unwittingly been included, the publisher will be pleased to make amends at the earliest possible opportunity.

To avoid the issue of disclosure of answer-related information to candidates, all copyright acknowledgements are reproduced online in the Cambridge International Examinations Copyright Acknowledgements Booklet. This is produced for each series of examinations and is freely available to download at www.cie.org.uk after the live examination series.

Cambridge International Examinations is part of the Cambridge Assessment Group. Cambridge Assessment is the brand name of University of Cambridge Local Examinations Syndicate (UCLES), which is itself a department of the University of Cambridge.

The Periodic Table of Elements

		Group																																																																																																																																																																																																																																																																																																																																																																																																																																																																																																																
I	II	III	IV	V	VI	VII	VIII																																																																																																																																																																																																																																																																																																																																																																																																																																																																																																											
		1 H hydrogen 1																																																																																																																																																																																																																																																																																																																																																																																																																																																																																																																
3 Li lithium 7	4 Be beryllium 9	Key atomic number atomic symbol name relative atomic mass										5 B boron 11	6 C carbon 12	7 N nitrogen 14	8 O oxygen 16	9 F fluorine 19	10 Ne neon 20																																																																																																																																																																																																																																																																																																																																																																																																																																																																																																	
11 Na sodium 23	12 Mg magnesium 24	13 Al aluminium 27	14 Si silicon 28	15 P phosphorus 31	16 S sulfur 32	17 Cl chlorine 35.5	18 Ar argon 40	19 K potassium 39	20 Ca calcium 40	21 Sc scandium 45	22 Ti titanium 48	23 V vanadium 51	24 Cr chromium 52	25 Mn manganese 55	26 Fe iron 56	27 Co cobalt 59	28 Ni nickel 59	29 Cu copper 64	30 Zn zinc 65	31 Ga gallium 70	32 Ge germanium 73	33 As arsenic 75	34 Se selenium 79	35 Br bromine 80	36 Kr krypton 84																																																																																																																																																																																																																																																																																																																																																																																																																																																																																									
37 Rb rubidium 85	38 Sr strontium 88	39 Y yttrium 89	40 Zr zirconium 91	41 Nb niobium 93	42 Mo molybdenum 96	43 Tc technetium —	44 Ru ruthenium 101	45 Rh rhodium 103	46 Pd palladium 106	47 Ag silver 108	48 Cd cadmium 112	49 In indium 115	50 Sn tin 119	51 Sb antimony 122	52 Te tellurium 128	53 I iodine 127	54 Xe xenon 131	55 Cs caesium 133	56 Ba barium 137	57–71 lanthanoids	72 Hf hafnium 178	73 Ta tantalum 181	74 W tungsten 184	75 Re rhenium 186	76 Os osmium 190	77 Ir iridium 192	78 Pt platinum 195	79 Au gold 197	80 Hg mercury 201	81 Tl thallium 204	82 Pb lead 207	83 Bi bismuth 209	84 Po polonium —	85 At astatine —	86 Rn radon —																																																																																																																																																																																																																																																																																																																																																																																																																																																																															
87 Fr francium —	88 Ra radium —	89–103 actinoids	104 Rf rutherfordium —	105 Db dubnium —	106 Sg seaborgium —	107 Bh bohrium —	108 Hs hassium —	109 Mt meitnerium —	110 Ds darmstadtium —	111 Rg roentgenium —	112 Cn copernicium —	113 Nh nihonium —	114 Fl flerovium —	115 Mc moscovium —	116 Lv livermorium —	117 Ts tennessine —	118 Og oganesson —	119 Uu unbinilium —	120 Uub unbinilium —	121 Uut ununilium —	122 Uuq ununilium —	123 Uub ununilium —	124 Uut ununilium —	125 Uuq ununilium —	126 Uub ununilium —	127 Uut ununilium —	128 Uuq ununilium —	129 Uub ununilium —	130 Uut ununilium —	131 Uuq ununilium —	132 Uub ununilium —	133 Uut ununilium —	134 Uuq ununilium —	135 Uub ununilium —	136 Uut ununilium —	137 Uuq ununilium —	138 Uub ununilium —	139 Uut ununilium —	140 Uuq ununilium —	141 Uub ununilium —	142 Uut ununilium —	143 Uuq ununilium —	144 Uub ununilium —	145 Uut ununilium —	146 Uuq ununilium —	147 Uub ununilium —	148 Uut ununilium —	149 Uuq ununilium —	150 Uub ununilium —	151 Uut ununilium —	152 Uuq ununilium —	153 Uub ununilium —	154 Uut ununilium —	155 Uuq ununilium —	156 Uub ununilium —	157 Uut ununilium —	158 Uuq ununilium —	159 Uub ununilium —	160 Uut ununilium —	161 Uuq ununilium —	162 Uub ununilium —	163 Uut ununilium —	164 Uuq ununilium —	165 Uub ununilium —	166 Uut ununilium —	167 Uuq ununilium —	168 Uub ununilium —	169 Uut ununilium —	170 Uuq ununilium —	171 Uub ununilium —	172 Uut ununilium —	173 Uuq ununilium —	174 Uub ununilium —	175 Uut ununilium —	176 Uuq ununilium —	177 Uub ununilium —	178 Uut ununilium —	179 Uuq ununilium —	180 Uub ununilium —	181 Uut ununilium —	182 Uuq ununilium —	183 Uub ununilium —	184 Uut ununilium —	185 Uuq ununilium —	186 Uub ununilium —	187 Uut ununilium —	188 Uuq ununilium —	189 Uub ununilium —	190 Uut ununilium —	191 Uuq ununilium —	192 Uub ununilium —	193 Uut ununilium —	194 Uuq ununilium —	195 Uub ununilium —	196 Uut ununilium —	197 Uuq ununilium —	198 Uub ununilium —	199 Uut ununilium —	200 Uuq ununilium —	201 Uub ununilium —	202 Uut ununilium —	203 Uuq ununilium —	204 Uub ununilium —	205 Uut ununilium —	206 Uuq ununilium —	207 Uub ununilium —	208 Uut ununilium —	209 Uuq ununilium —	210 Uub ununilium —	211 Uut ununilium —	212 Uuq ununilium —	213 Uub ununilium —	214 Uut ununilium —	215 Uuq ununilium —	216 Uub ununilium —	217 Uut ununilium —	218 Uuq ununilium —	219 Uub ununilium —	220 Uut ununilium —	221 Uuq ununilium —	222 Uub ununilium —	223 Uut ununilium —	224 Uuq ununilium —	225 Uub ununilium —	226 Uut ununilium —	227 Uuq ununilium —	228 Uub ununilium —	229 Uut ununilium —	230 Uuq ununilium —	231 Uub ununilium —	232 Uut ununilium —	233 Uuq ununilium —	234 Uub ununilium —	235 Uut ununilium —	236 Uuq ununilium —	237 Uub ununilium —	238 Uut ununilium —	239 Uuq ununilium —	240 Uub ununilium —	241 Uut ununilium —	242 Uuq ununilium —	243 Uub ununilium —	244 Uut ununilium —	245 Uuq ununilium —	246 Uub ununilium —	247 Uut ununilium —	248 Uuq ununilium —	249 Uub ununilium —	250 Uut ununilium —	251 Uuq ununilium —	252 Uub ununilium —	253 Uut ununilium —	254 Uuq ununilium —	255 Uub ununilium —	256 Uut ununilium —	257 Uuq ununilium —	258 Uub ununilium —	259 Uut ununilium —	260 Uuq ununilium —	261 Uub ununilium —	262 Uut ununilium —	263 Uuq ununilium —	264 Uub ununilium —	265 Uut ununilium —	266 Uuq ununilium —	267 Uub ununilium —	268 Uut ununilium —	269 Uuq ununilium —	270 Uub ununilium —	271 Uut ununilium —	272 Uuq ununilium —	273 Uub ununilium —	274 Uut ununilium —	275 Uuq ununilium —	276 Uub ununilium —	277 Uut ununilium —	278 Uuq ununilium —	279 Uub ununilium —	280 Uut ununilium —	281 Uuq ununilium —	282 Uub ununilium —	283 Uut ununilium —	284 Uuq ununilium —	285 Uub ununilium —	286 Uut ununilium —	287 Uuq ununilium —	288 Uub ununilium —	289 Uut ununilium —	290 Uuq ununilium —	291 Uub ununilium —	292 Uut ununilium —	293 Uuq ununilium —	294 Uub ununilium —	295 Uut ununilium —	296 Uuq ununilium —	297 Uub ununilium —	298 Uut ununilium —	299 Uuq ununilium —	300 Uub ununilium —	301 Uut ununilium —	302 Uuq ununilium —	303 Uub ununilium —	304 Uut ununilium —	305 Uuq ununilium —	306 Uub ununilium —	307 Uut ununilium —	308 Uuq ununilium —	309 Uub ununilium —	310 Uut ununilium —	311 Uuq ununilium —	312 Uub ununilium —	313 Uut ununilium —	314 Uuq ununilium —	315 Uub ununilium —	316 Uut ununilium —	317 Uuq ununilium —	318 Uub ununilium —	319 Uut ununilium —	320 Uuq ununilium —	321 Uub ununilium —	322 Uut ununilium —	323 Uuq ununilium —	324 Uub ununilium —	325 Uut ununilium —	326 Uuq ununilium —	327 Uub ununilium —	328 Uut ununilium —	329 Uuq ununilium —	330 Uub ununilium —	331 Uut ununilium —	332 Uuq ununilium —	333 Uub ununilium —	334 Uut ununilium —	335 Uuq ununilium —	336 Uub ununilium —	337 Uut ununilium —	338 Uuq ununilium —	339 Uub ununilium —	340 Uut ununilium —	341 Uuq ununilium —	342 Uub ununilium —	343 Uut ununilium —	344 Uuq ununilium —	345 Uub ununilium —	346 Uut ununilium —	347 Uuq ununilium —	348 Uub ununilium —	349 Uut ununilium —	350 Uuq ununilium —	351 Uub ununilium —	352 Uut ununilium —	353 Uuq ununilium —	354 Uub ununilium —	355 Uut ununilium —	356 Uuq ununilium —	357 Uub ununilium —	358 Uut ununilium —	359 Uuq ununilium —	360 Uub ununilium —	361 Uut ununilium —	362 Uuq ununilium —	363 Uub ununilium —	364 Uut ununilium —	365 Uuq ununilium —	366 Uub ununilium —	367 Uut ununilium —	368 Uuq ununilium —	369 Uub ununilium —	370 Uut ununilium —	371 Uuq ununilium —	372 Uub ununilium —	373 Uut ununilium —	374 Uuq ununilium —	375 Uub ununilium —	376 Uut ununilium —	377 Uuq ununilium —	378 Uub ununilium —	379 Uut ununilium —	380 Uuq ununilium —	381 Uub ununilium —	382 Uut ununilium —	383 Uuq ununilium —	384 Uub ununilium —	385 Uut ununilium —	386 Uuq ununilium —	387 Uub ununilium —	388 Uut ununilium —	389 Uuq ununilium —	390 Uub ununilium —	391 Uut ununilium —	392 Uuq ununilium —	393 Uub ununilium —	394 Uut ununilium —	395 Uuq ununilium —	396 Uub ununilium —	397 Uut ununilium —	398 Uuq ununilium —	399 Uub ununilium —	400 Uut ununilium —	401 Uuq ununilium —	402 Uub ununilium —	403 Uut ununilium —	404 Uuq ununilium —	405 Uub ununilium —	406 Uut ununilium —	407 Uuq ununilium —	408 Uub ununilium —	409 Uut ununilium —	410 Uuq ununilium —	411 Uub ununilium —	412 Uut ununilium —	413 Uuq ununilium —	414 Uub ununilium —	415 Uut ununilium —	416 Uuq ununilium —	417 Uub ununilium —	418 Uut ununilium —	419 Uuq ununilium —	420 Uub ununilium —	421 Uut ununilium —	422 Uuq ununilium —	423 Uub ununilium —	424 Uut ununilium —	425 Uuq ununilium —	426 Uub ununilium —	427 Uut ununilium —	428 Uuq ununilium —	429 Uub ununilium —	430 Uut ununilium —	431 Uuq ununilium —	432 Uub ununilium —	433 Uut ununilium —	434 Uuq ununilium —	435 Uub ununilium —	436 Uut ununilium —	437 Uuq ununilium —	438 Uub ununilium —	439 Uut ununilium —	440 Uuq ununilium —	441 Uub ununilium —	442 Uut ununilium —	443 Uuq ununilium —	444 Uub ununilium —	445 Uut ununilium —	446 Uuq ununilium —	447 Uub ununilium —	448 Uut ununilium —	449 Uuq ununilium —	450 Uub ununilium —	451 Uut ununilium —	452 Uuq ununilium —	453 Uub ununilium —	454 Uut ununilium —	455 Uuq ununilium —	456 Uub ununilium —	457 Uut ununilium —	458 Uuq ununilium —	459 Uub ununilium —	460 Uut ununilium —	461 Uuq ununilium —	462 Uub ununilium —	463 Uut ununilium —	464 Uuq ununilium —	465 Uub ununilium —	466 Uut ununilium —	467 Uuq ununilium —	468 Uub ununilium —	469 Uut ununilium —	470 Uuq ununilium —	471 Uub ununilium —	472 Uut ununilium —	473 Uuq ununilium —	474 Uub ununilium —	475 Uut ununilium —	476 Uuq ununilium —	477 Uub ununilium —	478 Uut ununilium —	479 Uuq ununilium —	480 Uub ununilium —	481 Uut ununilium —	482 Uuq ununilium —	483 Uub ununilium —	484 Uut ununilium —	485 Uuq ununilium —	486 Uub ununilium —	487 Uut ununilium —	488 Uuq ununilium —	489 Uub ununilium —	490 Uut ununilium —	491 Uuq ununilium —	492 Uub ununilium —	493 Uut ununilium —	494 Uuq ununilium —	495 Uub ununilium —	496 Uut ununilium —	497 Uuq ununilium —	498 Uub ununilium —	499 Uut ununilium —	500 Uuq ununilium —	501 Uub ununilium —	502 Uut ununilium —	503 Uuq ununilium —	504 Uub ununilium —	505 Uut ununilium —	506 Uuq ununilium —	507 Uub ununilium —	508 Uut ununilium —	509 Uuq ununilium —	510 Uub ununilium —	511 Uut ununilium —	512 Uuq ununilium —	513 Uub ununilium —	514 Uut ununilium —	515 Uuq ununilium —	516 Uub ununilium —	517 Uut ununilium —	518 Uuq ununilium —	519 Uub ununilium —	520 Uut ununilium —	521 Uuq ununilium —	522 Uub ununilium —	523 Uut ununilium —	524 Uuq ununilium —	525 Uub ununilium —	526 Uut ununilium —	527 Uuq ununilium —	528 Uub ununilium —	529 Uut ununilium —	530 Uuq ununilium —	531 Uub ununilium —	532 Uut ununilium —	533 Uuq ununilium —	534 Uub ununilium —	535 Uut ununilium —	536 Uuq ununilium —	537 Uub ununilium —	538 Uut ununilium —	539 Uuq ununilium —	540 Uub ununilium —	541 Uut ununilium —	542 Uuq ununilium —	543 Uub ununilium —	544 Uut ununilium —	545 Uuq ununilium —	546 Uub ununilium —	547 Uut ununilium —	548 Uuq ununilium —	549 Uub ununilium —	550 Uut ununilium —	551 Uuq ununilium —	552 Uub ununilium —	553 Uut ununilium —	554 Uuq ununilium —	555 Uub ununilium —	556 Uut ununilium —	557 Uuq ununilium —	558 Uub ununilium —	559 Uut ununilium —	560 Uuq ununilium —	561 Uub ununilium —	562 Uut ununilium —	563 Uuq ununilium —	564 Uub ununilium —	565 Uut ununilium —	566 Uuq ununilium —	567 Uub ununilium —	568 Uut ununilium —	569 Uuq ununilium —	570 Uub ununilium —	571 Uut ununilium —	572 Uuq ununilium —	573 Uub ununilium —	574 Uut ununilium —	575 Uuq ununilium —	576 Uub ununilium —	577 Uut ununilium —	578 Uuq ununilium —	579 Uub ununilium —	580 Uut ununilium —	581 Uuq ununilium —	582 Uub ununilium —	583 Uut ununilium —	584 Uuq ununilium —	585 Uub ununilium —	586 Uut ununilium —	587 Uuq ununilium —	588 Uub ununilium —	589 Uut ununilium —	590 Uuq ununilium —	591 Uub ununilium —	592 Uut ununilium —	593 Uuq ununilium —	594 Uub ununilium —	595 Uut ununilium —	596 Uuq ununilium —	597 Uub ununilium —	598 Uut ununilium —	599