



UNIVERSITY OF CAMBRIDGE INTERNATIONAL EXAMINATIONS
International General Certificate of Secondary Education

CANDIDATE
NAME

CENTRE
NUMBER

--	--	--	--	--

CANDIDATE
NUMBER

--	--	--	--

BIOLOGY

0610/62

Paper 6 Alternative to Practical

October/November 2012

1 hour

Candidates answer on the Question Paper

No Additional Materials are required.



READ THESE INSTRUCTIONS FIRST

Write your Centre number, candidate number and name on all the work you hand in.

Write in dark blue or black pen.

You may use a pencil for any diagrams or graphs.

Do not use staples, paper clips, highlighters, glue or correction fluid.

DO NOT WRITE IN ANY BARCODES.

Answer **all** questions.

Electronic calculators may be used.

You may lose marks if you do not show your working or if you do not use appropriate units.

At the end of the examination, fasten all your work securely together.

The number of marks is given in brackets [] at the end of each question or part question.

For Examiner's Use	
1	
2	
3	
Total	

This document consists of **11** printed pages and **1** blank page.



- 1 Milk is the main food for young mammals and contains all the required nutrients for the first few months of life. Milk needs to be clotted before it can be digested.

The stomach of a young mammal produces an enzyme which causes soluble proteins in milk to form insoluble clots.

Some students investigated the effect of temperature on this enzyme using two types of milk. The students measured the time taken for clots to form.

Table 1.1 shows the results for **fresh** milk.

Table 1.2 shows the results for **dried** milk mixed with water.

Table 1.1

temperature / °C	time taken for fresh milk to clot / seconds			
	1st reading	2nd reading	3rd reading	mean
33	36	42	30	36
35	35	34	30	33
37	15	20	25
39	19	15	20	18
41	27	25	23	25

- (a) Complete Table 1.1 by calculating the mean value for 37 °C.

Write your answer in Table 1.1

[1]

Table 1.2

temperature / °C	time taken for dried milk to clot / seconds			
	1st reading	2nd reading	3rd reading	mean
33	210	160	200	190
35	165	174	150	163
37	150	125	130	135
39	118	90	110	106
41	69	102	60	77

(c) Suggest **and** explain why each test has been carried out three times.

.....
.....
.....
..... [2]

(d) Enzymes are involved in the clotting process. A water bath was used to keep the temperature constant, at each temperature, for each test.

Suggest why it is important to keep the temperature constant.

.....
.....
.....
.....
..... [3]

(e) The clots are separated and used in cheese making.

Describe how you would safely carry out a test to compare the protein content of the separated clots with the protein content of the liquid.

.....
.....
.....
.....
.....
.....
..... [4]

[Total: 19]

2 Fig. 2.1 shows part of a plant organ cut vertically in half.



Fig. 2.1

(a) (i) Make a large, labelled drawing of the cut surface of this organ.

*For
Examiner's
Use*

[4]

(ii) Suggest **two** biological functions of this organ for the plant.

- 1
- 2 [2]

(b) A student removed a small sample of the organ and tested it for the presence of starch. State the name of the reagent used to test for the presence of starch.

..... [1]

(c) Fig. 2.1, on page 5, shows roots growing from the organ.

Fig. 2.2 shows some cells found just behind the growing tip of a root.




Fig. 2.2

(i) Some of these cells are dividing. During division the 'daughter' chromosomes separate at the equator and move towards the poles of the cell.

On Fig. 2.2 draw a circle around **one** cell that shows the chromosomes which have separated. [1]

(ii) Name the type of cell division taking place in Fig. 2.2.

..... [1]

Fig. 2.3 shows some mature root cells further from the tip.

For
Examiner's
Use

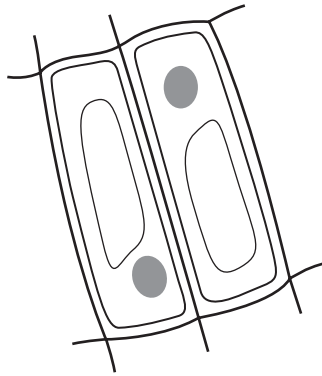


Fig. 2.3

- (d) Describe two visible differences between the dividing cells shown in Fig. 2.2 and the mature cells shown in Fig. 2.3.

dividing cells	mature cells
1
2

[2]

[Total: 11]

- 3 Flies lay eggs which hatch into maggots. An investigation was carried out on the respiration rate of maggots.

*For
Examiner's
Use*

Fig. 3.1 shows some living maggots in a large test-tube.

The apparatus was left to settle with the clip open.

The clip was then closed and a drop of coloured liquid was introduced into the open end of the capillary tube.

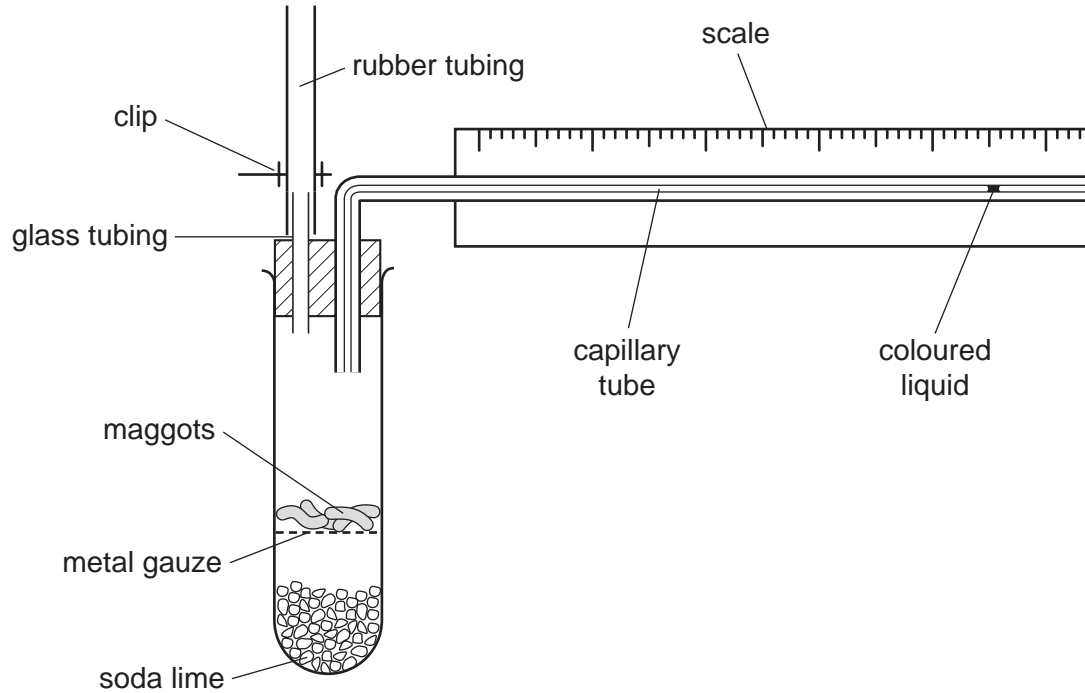


Fig. 3.1

Soda lime absorbs carbon dioxide.

During the investigation, the drop of coloured liquid moved along the capillary tube **towards** the test-tube.

(a) Explain why the drop of coloured liquid moved towards the test-tube.

.....
.....
.....
.....
.....
.....
.....
..... [4]

(b) Suggest a suitable control for this investigation.

.....
..... [1]

*For
Examiner's
Use*

Some students carried out a similar investigation with another sample of maggots to find the effect of temperature on this process.

*For
Examiner's
Use*

The distance moved by the drop of coloured liquid was measured after one minute at each temperature.

Fig. 3.2 shows the results.

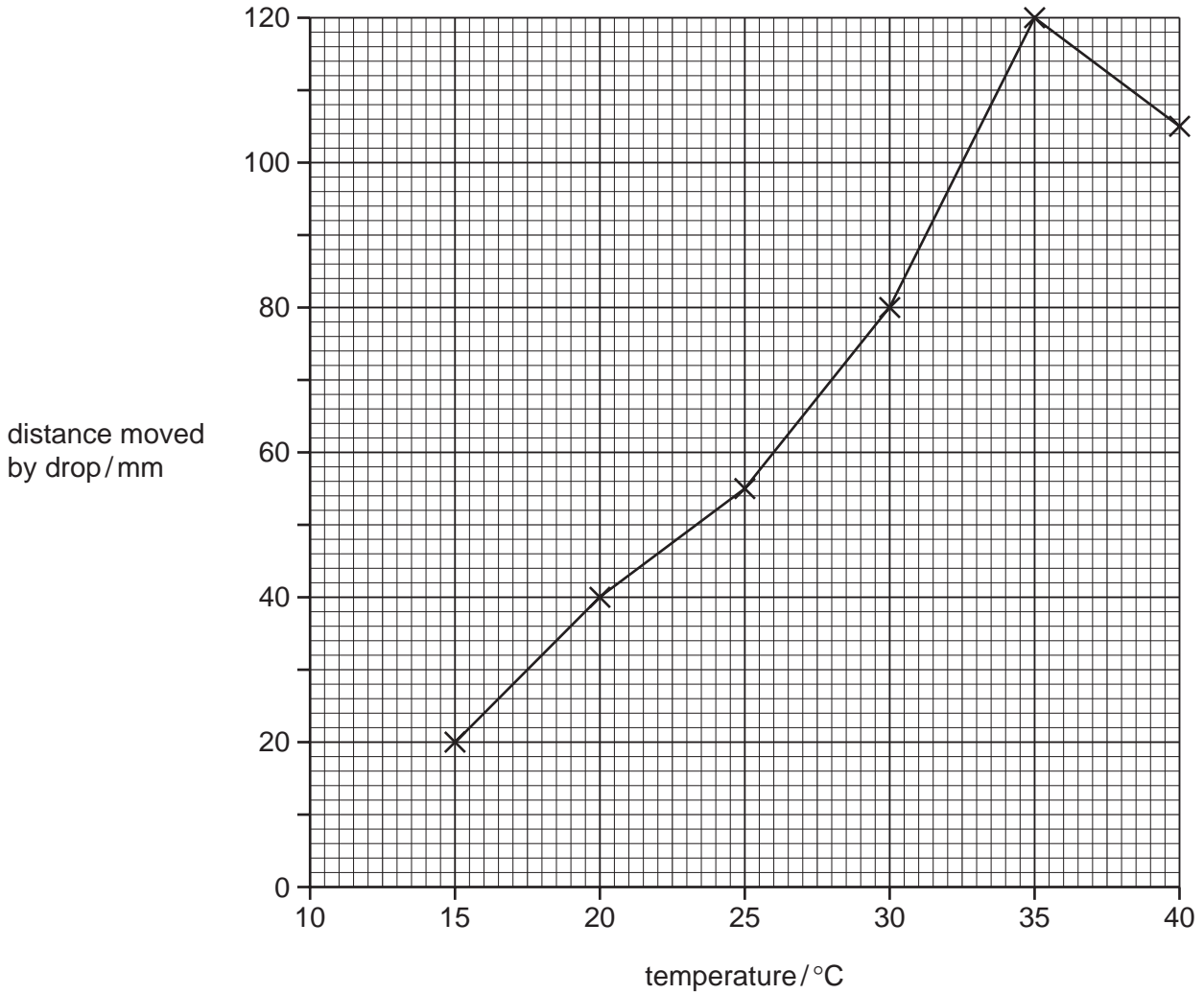


Fig. 3.2

(c) Describe the results shown on the graph.

.....

.....

.....

.....

.....

.....

.....

[3]

(d) Explain the difference between the results at 20 °C and 30 °C.

.....

.....

.....

..... [2]

[Total: 10]

*For
Examiner's
Use*

BLANK PAGE

Permission to reproduce items where third-party owned material protected by copyright is included has been sought and cleared where possible. Every reasonable effort has been made by the publisher (UCLES) to trace copyright holders, but if any items requiring clearance have unwittingly been included, the publisher will be pleased to make amends at the earliest possible opportunity.

University of Cambridge International Examinations is part of the Cambridge Assessment Group. Cambridge Assessment is the brand name of University of Cambridge Local Examinations Syndicate (UCLES), which is itself a department of the University of Cambridge.